

परमाणु ऊर्जा शिक्षण संस्था, मुंबई
ATOMIC ENERGY EDUCATION SOCIETY


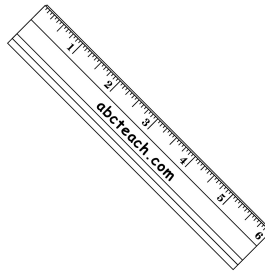
Session: 2023-24


Class: II Subject: Mathematics

WORKSHEET NO. - 1


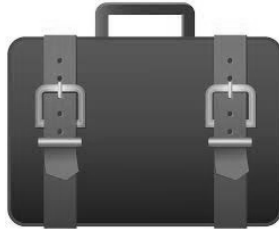


Name of the chapter: L-1 What is long? What is round? L-2 Counting in groups

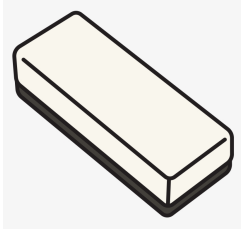
Q1. Identify and write each object that is ROUND in shape or LONG in shape. 10 marks





Q2. Identify and write each object that can roll or slide or roll and slide. 10 m











Q3. Without actual counting , find the total number of objects. 5 marks






a. Number of teddies in each group=

b. Total number of teddies=



a. Number of strawberries in each group=

b. Total number of strawberries=



a. Number of bows in each group =

b. Total number of bows =



a. Number of crayons in each group =

b. Total number of crayons =



a. Number of lollipops in each group =

b. Total number of lollipops =

Q4. Write the numbers in their short form. One has been done for you.

5 marks

- a. 7 tens 5 ones = 75
- b. 9 tens 2 ones =
- c. 4 tens 3 ones =
- d. 8 tens =
- e. 6 tens 1 one =
- f. 9 tens 6 ones =

Q5. Expand the numbers. One has been done for you.

5 marks

- a. $84 = 80 + 4$
- b. $29 =$
- c. $51 =$
- d. $37 =$
- e. $55 =$
- f. $48 =$

Q6. Join the dots numbers from 1 to 20.

5 marks

