

Total no. of printed pages: 4

परमाणु ऊर्जाशिक्षण संस्था

Atomic Energy Education Society


Session 2023-24

Class/Sec: Balvatika / \_\_\_\_\_ Subject: MATHS Date: \_\_\_\_\_

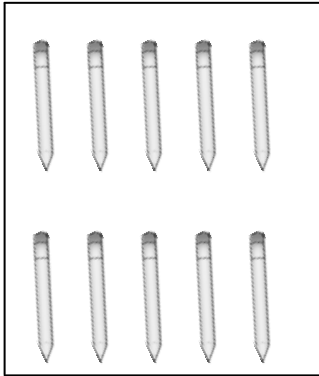
Name of the Student: \_\_\_\_\_ Roll no.: \_\_\_\_\_

Worksheet based on lesson – Numbers one to hundred


**Q1 Count and match.**



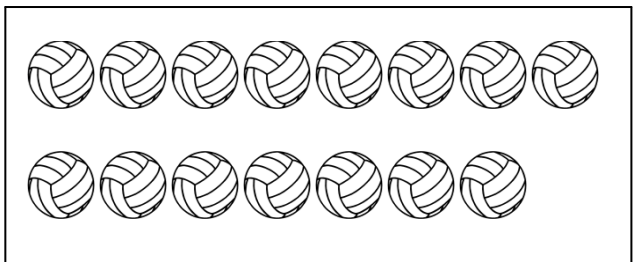
10



9



15



13

**QII Write the missing numbers.**

- i) 21, 22, \_\_\_\_\_, \_\_\_\_\_, 25
- ii) 35, 36, 37, \_\_\_\_\_, \_\_\_\_\_
- iii) 46, \_\_\_\_\_, \_\_\_\_\_, 49, 50
- iv) 59, \_\_\_\_\_, \_\_\_\_\_, 62, 63
- v) 78, 79, \_\_\_\_\_, \_\_\_\_\_, 82
- vi) 95, 96, 97, \_\_\_\_\_, \_\_\_\_\_
- vii) 83, \_\_\_\_\_, \_\_\_\_\_, 86, 87

**QIII Write in words.**


- i) 20: \_\_\_\_\_
- ii) 13: \_\_\_\_\_
- iii) 12: \_\_\_\_\_
- iv) 15: \_\_\_\_\_
- v) 19: \_\_\_\_\_

**QIV Write the number.**


- i) Seven \_\_\_\_\_.
- ii) Seventeen \_\_\_\_\_.
- iii) Nineteen \_\_\_\_\_.
- iv) Four \_\_\_\_\_.

**QV Draw balls for the given number.**

i) 11



ii) 9




**Q VI Count the objects and circle the correct number.**



7

8

9



10


12

15

**Q VII Colour the tree on your right.**



**Q VIII Tick ( ✓ ) the chair on your left.**



**Q IX Draw a ball on right side of the bat and colour it.**

