

परमाणु ऊर्जा शिक्षण संस्था

Atomic Energy Education Society

वार्षिक परीक्षा /Annual Examination Practice paper-1

कक्षा /Class : III

अवधि/Time : 3 hours

विषय/Subject : English

अधिकतम अंक Maximum Marks : 80

विद्यार्थी द्वारा भरा जाए/To be filled by the student

अद्वितीय परीक्षा क्रमांक/Unique Examination No.: _____

कक्षा/अनुभाग: Class/Sec: _____ दिनांक/Date : _____

परीक्षा का दिन/Day of Examination: _____

विद्यालय का नाम/Name of the School: _____

हस्ताक्षर निरीक्षक (दिनांक सहित) Invigilator's Sign(With date): _____

अध्यापकों द्वारा भरा जाए/To be filled by the teacher

प्राप्तांक/Marks Obtained _____ पूर्णांक/Total Marks _____

हस्ताक्षर परीक्षक (दिनांक सहित)/Examiner's Sign(With date) _____

हस्ताक्षर जाँचकर्ता (दिनांक सहित)/Cross Checker's Sign (With date) _____

हस्ताक्षर परीक्षा प्रभारी(दिनांक सहित)/Exam I/C Sign(With date) _____

सामान्य निर्देश/General Instructions:

1. Marks are indicated against each question.
2. Read each question carefully and answer neatly.
3. Ensure that questions from every section are answered.
4. On completion of the exam, the student must hand over the answer sheet to the invigilator.

SECTION A (READING) - 20 Mark

A1. Read the passage given below and answer the following questions. (1 x5=5 M)

Madhu loved food. He always wanted to eat different kinds of food and snacks. He was never tired of eating. Every day, at noon, he would sit under a banyan tree and eat his lunch.

One day, as he was eating, an old man came. Madhu felt sorry for him and shared his food with him. The old man was so happy.

Tick the correct answer:

- 1) What is the name of the boy in the story?
a) Madhu b) Manu c) Raju
- 2) What is the name of the tree mentioned in the passage?
a) Peepal b) Banyan c) Oak
- 3) What Madhu wanted to eat?
a) daal and rice b) different kinds of food c) khichdi
- 4) Who sat with Madhu under the banyan tree?
a) His father b) His mother c) an old man
- 5) Write the opposite of given word from the passage.

Sad X _____

A2. Read the passage given below and answer the following questions. (5x1=5)

There was a girl named Rani who lived in a village. She was very curious and used to ask many questions to her family, teachers and friends.

“Why is the sky blue?”

“Where does the Sun go at night?”

One evening, Rani heard her mother singing, “Chanda mama door ke...”

Tick the correct answer.

- 1) What was the name of the girl in the story?
a) Riya b) Reetu c) Rani
- 2) Where did Rani live?
a) in a village b) in the jungle c) in a town
- 3) What did Rani ask to her family, teachers and friends?
a) many questions b) puzzles c) stories
- 4) What was Rani’s mother doing?
a) playing b) singing c) dancing
- 5) Find a word that means ‘eager to learn’ in the passage.
a) heard b) questions c) curious

(UNSEEN PASSAGE)

A3. Read the following passage and answer the questions given below. (10)

The giraffe is the world's tallest animal. They are known for their long necks, long legs, and spotted body. Giraffes have small horns at the top of their heads that can grow up to five inches. These horns are used to protect them from an enemy. Male giraffes are taller than female giraffes and can stand nearly nineteen feet tall. Most giraffes can live up to 25 years of age in the wild.

A) Read the passage and fill in the blanks. (2x 1 = 2M)

1) _____ is the tallest animal in the world.

2) Most giraffes can live up to _____ years.

B) Write true or false. (4x1 = 4M)

1) Giraffes are known for their long neck. _____

2) Giraffes can grow up to 100 feet. _____

3) Giraffes use their horn to protect from the enemies. _____

4) Giraffes can live up to 25 years of age. _____

C) Find the opposite words from the passage. (2x1=2)

1) Short x _____.

2) Friend x _____

D) Write any two words from the passage ending with 'ed'. (2x1 =2)

i) _____ ii) _____

SECTION B (TEXTUAL QUESTIONS) – 10 Marks

B1. Tick the correct answer. (2X1=2)

1) What is khichdi called in Tamil Nadu?

a) pongal b) kichuri

2) Where does the Sun go after the end of the day?

a) Sinks behind a distant hill b) goes into the forest

B2. Answer the following questions.

(4x2=8)

3) What did the king do playfully ?

4) Why did Chanda Mama fall asleep ?

5) What did Pratik say in excitement ?

6) Why did the farmer say, 'Thank God'?

SECTION C (CREATIVE WRITING) – 10 Marks

C1. Write 5 sentences on “what the trees give us?” You may use the words given in the box. (5M)



oxygen , fruits, wood , shelter,
 birds, shade

C2. It was a full moon night. Children had come out to see the Moon. Complete the conversation they had by picking the words from the help box.(5M)

A camera for the picture, so bright and big , Says the full moon looks very beautiful, let's take a picture
--

Govind: Wow, look!

Safura : The moon looks so big and bright .

Sukanya : Isn't it ?

Dhruv : My grandfather _____

Ramani : Let us take a picture.

Safura : My mother has _____

Dhruv : Come. Stand here and _____

Govind : The moon is _____

SECTION -D - (GRAMMAR) 15 Marks

D1. Fill in the blanks with 'is' or 'are'. (1x4 = 4)

1. There _____ animals in the jungle.
2. The table _____ made of woods.
3. These mangoes _____ sweet.
4. The book _____ on the table.

D2. Tick on the full form of can't. (1)

- a) Can not b) Can it

D3. Fill in the blanks using 'a' or 'an'. (1X2=2)

- i) _____ brown hen laid _____ egg.
- ii) _____ eagle sat on _____ building .

D4. Underline the letter which is silent in the word. (1)

W a l k

D5. Fill in the blanks with opposite of underlined word. (1x2=2)

- i) **thick** book _____ book (thin/ soft)
- ii) **long** journey _____ journey (small / short)

D6. Write two words that tell us about the laddoo (describing words).

- i) _____ ii) _____ (1x2=2)

D7. Frame a sentence using the given word. (1)

Play-_____

D8. Add 'ed' and change into past tense.

(1x2=2)

Example: like liked

a) Help _____

b) work _____

SECTION -E (VOCABULARY) 10 Marks

E. Fill in the blanks by forming words using 'sk', 'sw', 'sp', and 'st'.

(1x5=5)

1. There are ___ings in the park.
2. The children throw _____ones in the river.
3. I need a ___oon and a bowl for soup.
4. Have you heard the ___ory of the boy who cried wolf?
5. The blue ___irt matched with the pink shirt

E6. Read the words and circle the words that are found in the sky.

(1/2X4=2)

Stars	Flowers	Monkeys	Moon
Bicycle	Clouds	Rainbow	Shoes

E7. Add 'Sun' to the following words to make newwords. Write them in the space given.

(1X3=3)

1) light _____

2) flower _____

3) glasses _____

SECTION -F (SPELLINGS) – 10 Marks

F1. Fill in the blanks to spell the word. (1X 2 = 2)

i) j o u ____ n ____ y

ii) a ____ p e ____ r ____ d

F2. Rearrange the letters to make a correct word. (1X2=2)

c i o r u s u _____

r e l c e a p _____

F3. Make any two meaningful words using the letters of the given word.

One is done for you. (1X 2 = 2)

Watermelons

i) Ten ii) _____ iii) _____

F4. Match the following. (1X 4 = 4)

Mare

lioness

Peacock

cow

Lion

horse

Bull

peahen

SECTION -G (HANDWRITING)

G1. Write the given paragraph in neat and clean handwriting.

(5)

“DISCIPLINE” is a good thing and there is no evil in it. It builds character, develops strength and unity and faster Co-operation. It is, therefore necessary, that one should be taught discipline from childhood. It should never be overlooked, as it is the secret of success in life. A disciplined mind leads to happiness.

[illegible]



Atomic Energy Education Society

वार्षिक परीक्षा /Annual Examination Practice paper-2

Class : III

Duration: 3 Hours

Subject: English

Maximum Marks : 80

To be filled by the student

Unique Examination No: _____ Class /Sec: _____ Date: _____

Day of Examination: _____

Name of the School: _____

Invigilator's Sign. (With date): _____

To be filled by the Teachers

Marks Obtained

Total Marks

Examiner's Sign. (With date): _____

Cross Checker's Sign. (With date): _____

Exam I/C Sign. (With date): _____

General Instructions:

1. Marks for questions are indicated against each.
2. Read each question carefully and answer neatly.
3. Ensure that questions for each section are answered.
4. On completion of the Exam, the student must hand over the answer sheet to the invigilator.
5. The student should ensure that the Answer sheet is not damaged or folded.

Section A: Reading (20 marks)

A.1 Read the following passage carefully.

Madhu loved food. He always wanted to eat different kinds of food and snacks. He was never tired of eating. Every day, at noon, he would sit under a banyan tree and eat his lunch. One day, as he was eating, an old man came. Madhu felt sorry for him and shared food with him.

A1.1 Choose the correct answer and fill in the blanks. (5x1=5)

- a) Madhu loved _____.
i) tree ii) food iii) children
- b) He always wanted to eat different kinds of _____.
i) chips ii) fruits iii) food and snacks
- c) _____ shared his food with an old man.
i) Madhu ii) Ramu iii) Kalu
- d) Opposite of 'hate' _____.
i) eat ii) love iii) sit
- e) Same meaning of 'division' _____.
i) share ii) sorry iii) under

A.2 Read the following passage carefully.

There was a girl named Rani who lived in a village. She was very curious and used to ask many questions to her family, teachers and friends. One evening Rani heard her mother singing, "Chanda mama door ke..." Hearing this, Rani asked her mother, "Amma, how far is the Moon?" Amma said, "Rani, the moon is very far in the sky?"

A2.1 Choose the correct answer and fill in the blanks. (5x1=5)

- a) There was a girl named _____.

i) Mina ii) Rani iii) Vani

b) Rani lived in a _____.

i) village ii) temple iii) hostel

c) Rani was very _____.

i) brave ii) curious iii) lazy

d) Opposite of '**morning**' _____.

i) day ii) night iii) evening

e) Same meaning of 'far' _____.

i) distant ii) sky iii) village

A.3 Read the following passage carefully.

Shivam and Nitin were students of Class V. One day they got up early. It was a pleasant morning. They saw many people in the park. Some of them were running on the track around the park. Children were playing. In the middle of the park, some people were sitting and making different poses.

A3.1 Tick the correct answer and write it in the blanks. (6x1=6)

a) Shivam and Nitin were students of _____.

i) Class III ii) Class IV iii) Class V

b) They got up _____.

i) early ii) late iii) at noon

c) They saw many _____ in the park.

i) birds ii) animals iii) people

d) Some of them were _____ on the track around the park.

i) running ii) dancing iii) singing

e) _____ were playing.

i) men ii) people iii) children

f) In the middle of the park, some people were _____ and making different poses.

i) sitting ii) talking iii) laughing

A3.2 Do as directed.

(4x1=4)

1) Write the opposite of –

i) same X _____

ii) one X _____

2) Write True or False.

i) Shivam and Nitin were students of class III. ()

ii) Children were playing. ()

Section B: Textual questions (10 marks)

B1. Answer the following questions.

(2x1=2)

1. Where did the child throw the big laddoo?

2. What did Chanda Mama try to count?

B2. Answer the following questions.

(4x2=8)

1. What did the farmer grow on his farm?

2. Where does the Sun go after the end of the day?

3. Who was Nandini Aunty?

4. What different kinds of laddoos have you eaten?

Section C: Creative Writing (10 marks)

C1. Write 5 sentences about your favourite festival. (5x1=5)

Or

Write 5 sentences about Chandrayaan.

C2. Look at the picture and write 5 sentences about it. (5x1=5)



Section D: Grammar (15 marks)

D1. Fill in the blanks with ‘is’ or ‘are’. (2x1=2)

- a) There _____ animals in the jungle.
- b) The book _____ on the table.

D2. Write the opposite of the underlined words. (2x1=2)

a) thick book - _____ book

b) long journey - _____ journey

D3. Rewrite the following sentences using and or but. (2x1=2)

a) I eat an apple. I eat an orange. I eat a peach. (and)

b) I like to watch cartoons. My sister likes to watch movies. (but)

D4. Choose a correct word from the bracket to describe the people. (2x1=2)

a) Pramod doesn't share his toys with anyone. He is _____. (brave /selfish)

b) Prerna always wishes everyone in the morning. She is _____. (polite /lazy)

D5. Fill in the blanks with 'here' or 'there'. (2x1=2)

a) The students are playing kabaddi _____.

b) _____ is your shirt.

D6. Fill in the blanks using 'a' or 'an'. (2x1=2)

a) A brown hen laid _____ egg.

b) An eagle sat on _____ building .

D7. Madhu enjoyed the following items. Write them in the correct basket.

($\frac{1}{2}$ x6=3)

Help Box

kheer	banana	kachori	laddoo	potato chips	guava
-------	--------	---------	--------	--------------	-------

Fruits	Sweets	Salty snacks

Section E: Vocabulary (10 marks)

E1. Add 'sun' to the following words to make a new word. (2x1=2)

- a) light _____ b) day _____

E2. Match the following. ($\frac{1}{2} \times 4 = 2$)

- | | |
|------------|---------|
| a) cock | lioness |
| b) lion | duck |
| c) peacock | hen |
| d) drake | peahen |

E3. Make a sentence with the given word. (2x1=2)

- a) play : _____
- b) blue : _____

E4. Write rhyming words for the following-

(2x1=2)

a) moon _____

b) big _____

E5. Write past tense (2nd form)-

(2x1=2)

a) want _____ (wants/wanted)

b) grow _____ (grew/growing)

Section F: Spelling (10 marks)

F1. Circle the correct spelling.

(3x1=3)

a) country contry countree

b) faarmer farmer farmar

c) happily happyly hapily

F2. Arrange the letters in the right order to make meaningful words.

(4x1=4)

a) idenchlr _____

b) nercor _____

c) dolado _____

d) nmoo _____

F3. Some letters are missing in each word. Write the missing letters:

(3x1=3)

a) st__rs

b) bri__ht

c) hicc__ps

Section G: Handwriting (5 marks)

Read the given paragraph carefully and write it in neat handwriting. (5)

Ram is a good boy. He keeps himself clean and tidy. He brushes his teeth twice a day and wear clean clothes after the bath. He washes his hands before eating. He likes to eat fruits and vegetables. He plays outdoor games. All of these helps him stay healthy.

[illegible]

Blank lined paper for writing.



परमाणु ऊर्जा शिक्षण संस्था
Atomic Energy Education Society

वार्षिक परीक्षा /Annual Examination Practice paper-3

कक्षा/Class : III

अवधि / Duration : 3 Hours

विषय/Subject : ENGLISH

अधिकतम अंक/Maximum Marks : 80

विद्यार्थी द्वारा भरा जाए / To be filled by the Student

अद्वितीय परीक्षा क्रमांक/Unique Examination No: _____

कक्षा / अनुभाग Class /Sec.: _____ दिनांक / Date: _____

परीक्षा का दिन /Day of Examination: _____

विद्यालय का नाम/Name of the School: _____

हस्ताक्षर निरीक्षक (दिनांक सहित) /Invigilator's Sign.(With date): _____

अध्यापकों द्वारा भरा जाए / To be filled by the Teachers

प्राप्तांक / Marks Obtained

पूर्णांक /Total Marks

हस्ताक्षर परीक्षक (दिनांक सहित) / Examiner's Sign.(With date): _____

हस्ताक्षर जाँचकर्ता (दिनांक सहित) / Cross Checker's Sign.(With date): _____

हस्ताक्षर परीक्षा प्रभारी (दिनांक सहित) / Exam I/C Sign.(With date): _____

सामान्यनिर्देश /General Instructions:

- Marks are indicated against each question .
- Read each question carefully and answer neatly.
- Ensure that questions from every section are answered.
- On completion of the exam ,the student must hand over the answer sheet to the invigilator.

READING (20 marks)

1) Read the passage carefully and answer the following questions.

Once upon a time, there was a farmer who liked fruits. So, he decided to grow fruits on his land. He worked hard to grow a variety of fruits. With hard work and care, the trees grew well. He took special care to grow grapes and watermelons in a small corner of his farm.

When the fruits were all ripe and ready to be eaten, the farmer decided to gift the best fruit to the king. Then his wife said, "This year, the best fruits on our farm are the watermelons and the grapes." The farmer thought about it and said, "Since it is a long journey to the palace, I shall take the grapes as watermelons are too heavy." So, he put bunches of grapes in a basket and walked to the king's palace. The farmer reached the palace.

- i) **Choose the correct answer and fill in the blanks.** (2X1=2M)
- a. He worked hard to grow a variety of _____. (vegetables /fruits)
- b. The farmer reached the _____. (palace/jungle)
- ii) The plural of “**bunch**” from the passage is _____. (1X1=1M)
- iii) The past tense of “**say**” is _____. (1X1=1M)
- iv) What did the farmer grow on his farm? (1X1=1M)

2) Read the poem carefully and answer the following questions.

The sun that shines all day so bright,
I wonder where it goes at night.
It sinks behind a distant hill
And all the world grows dark and still.
And then I go to bed and sleep
Until the day begins to peep.
And when my eyes open,
I see the Sun is
shining down on me.

i) Fill in the blanks. (2X1=2M)

a. I wonder where it goes at _____. (night / day)

b. I see the _____ is shining down on me. (Sun / Moon)

ii) Rhyming word of “peep” from the poem _____. (1X1=1M)

iii) The opposite of “day” from the poem _____. (1X1=1M)

iv) Where does the Sun go after the end of the day? (1X1=1M)

3) Read the passage and answer the following questions. (1X10=10M)

The little ant, Tiny, was very busy. It was a sunny morning, and the sun was shining brightly. Tiny was carrying a big crumb of bread, much bigger than herself. She was walking very slowly, dragging the crumb along the ground.

Suddenly, a big, clumsy grasshopper hopped right on top of the crumb! Tiny was very scared. "Oh dear!" she cried, "My delicious bread!"

The grasshopper looked down at Tiny. "Excuse me," he said, "I didn't mean to land on your bread." He hopped off quickly.

Tiny sighed in relief. She carefully picked up her crumb and continued on her way.

Tick (✓) the correct answer:

1. What was Tiny doing?

(a) Playing hide-and-seek

(b) Carrying a big crumb of bread

(c) Climbing a tall tree

(d) Swimming in the pond

2. What happened to Tiny's bread?

(a) A bird ate it

(b) A grasshopper landed on it

(c) It fell into the water

(d) It blew away in the wind

3. Who landed on the bread?
- (a) A big, clumsy grasshopper (b) A small, colorful butterfly
- (c) A friendly ladybug (d) A mischievous squirrel
4. What is the opposite of the word “little” ?
- (a) big (b) small
- (c) short (d) tiny
5. What did Tiny do after the grasshopper hopped off?
- (a) She cried (b) She ran away
- (c) She carefully picked up her crumb (d) She also hopped off
6. The grasshopper looked down at _____.
- (a) Tiny (b) sky
- (c) ground (d) Moon
7. Where was Tiny walking?
- (a) In the park (b) In the forest
- (c) On the ground (d) In the sky
8. How did Tiny feel when the grasshopper landed on her bread?
- (a) Happy (b) Scared
- (c) Excited (d) Angry
9. Complete the sentence.
- It was a sunny morning and the sun was _____.
10. What is the past tense of pick? _____

TEXTUAL QUESTIONS (10 MARKS)

4) Write true or false:

(2X1=2M)

- a) Madhu was happy because his wish was granted. _____
- b) Chandra means vehicle and yaan means Moon. _____

5) Answer the following questions.

(4X2=8M)

- i. What did Pratik say in excitement?

- ii. Why did Chanda Mama fall asleep?

- iii. What did Madhu enjoy?

- iv. What do you see when you look at the sky at night?

CREATIVE WRITING (10 MARKS)

6) Write five lines about the Moon by using the clues.

(1X5=5M)

[far, sky, chandrayaan, India, night, beautiful]

7) Look at the picture and write five sentences.

(1X5=5M)



GRAMMAR (15 MARKS)

8) Fill in the blanks with 'is' or 'are'.

(3X1=3M)

- i. These mangoes _____ sweet.
- ii. The girls _____ at the shop.
- iii. The car _____ on the road.

9) Rewrite the following sentences using 'and' or 'but'.

(3X1=3M)

- i. Sita plays basketball. Anju plays badminton.

- ii. I like to watch cartoons. My sister likes to watch movies.

- iii. I eat an apple. I eat a peach.

10) Fill in the blanks using 'a' or 'an'.

(3X1=3M)

- i. I saw _____ eagle yesterday.
- ii. _____ brown hen laid _____ egg.
- iii. _____ dog is barking at the postman.

11) Write plural form of the following words. (3X1=3M)

- i. flower - _____
- ii. orange - _____
- iii. tomato - _____

12) Write the past tense of the following words. (3X1=3M)

- i. pluck - _____
- ii. sit - _____
- iii. ask - _____

VOCABULARY (10 MARKS)

13) Write the opposite of the following words. (3X1=3M)

- i. soft - _____
- ii. good - _____
- iii. slow - _____

14) Write the opposite gender of the given words. (3X1=3M)

- i. drake - _____
- ii. lion - _____
- iii. bull - _____

15) Fill in the blanks by forming word, using 'st' and 'sw'. (2X1=2M)

- i. The boys throw ____ones in the river.
- ii. There are ____ings in the park.

16) Choose a suitable word to describe the given people. (2X1=2M)

- i. Ram always wishes everyone in the morning.
He is _____. (polite/selfish)
- ii. The woman saved the boy from the robber.
She is _____. (brave/lazy)

SPELLINGS (10 MARKS)

17) Fill in the missing letters:

(4X1=4M)

i. cu_iou_

ii. dis_ppe_r

iii. t_ar_

iv. po_pe_

18) Unjumble the letters to make meaningful words.

(3X1=3M)

i. yalor - _____

ii. tonuc - _____

iii. ckoetsr - _____

19) Circle the correct spellings.


(3X1=3M)

- | | | | | |
|------|----------|-----------|-----------|----------|
| i. | kachori | kachhori | kacchori | kachri |
| ii. | journey | journey | jourey | journay |
| iii. | scintist | scientast | scientist | scietist |

HANDWRITING (5 MARKS)

There was once an evil lion who thought he was king of the jungle. Every day he would hunt and kill animals for his food.

The animals had a meeting and came up with a plan. Each day, one animal would go the lion's den to be his meal. The lion would never have to hunt again and more animals would survive.

The page contains 15 sets of horizontal lines for handwriting practice. Each set consists of three lines: a top blue line, a middle red line, and a bottom blue line. These sets are arranged vertically down the page, providing a guide for letter height and placement.



परमाणु ऊर्जा शिक्षण संस्था Atomic Energy Education Society

वार्षिक परीक्षा / Annual Examination Practice paper-4

कक्षा / Class : 3

अवधि / Duration : 3 hrs.

विषय / Subject : English

अधिकतम अंक / Maximum Marks : 80

विद्यार्थी द्वारा भरा जाए / To be filled by the Student

अद्वितीय परीक्षा क्रमांक / Unique Examination No: _____

कक्षा / अनुभाग Class / Sec.: _____ दिनांक / Date: _____

परीक्षा का दिन / Day of Examination: _____

विद्यालय का नाम / Name of the School: _____

हस्ताक्षर निरीक्षक (दिनांक सहित) / Invigilator's Sign. (With date): _____

अध्यापकों द्वारा भरा जाए / To be filled by the Teachers

प्राप्तांक / Marks Obtained

पूर्णांक / Total Marks

हस्ताक्षर परीक्षक (दिनांक सहित) / Examiner's Sign. (With date): _____

हस्ताक्षर जाँचकर्ता (दिनांक सहित) / Cross Checker's Sign. (With date): _____

हस्ताक्षर परीक्षा प्रभारी (दिनांक सहित) / Exam I/C Sign. (With date): _____

सामान्य निर्देश / General Instructions:

- a) Marks are indicated against each question.
- b) Read each question carefully and answer neatly.
- c) Ensure that questions from every section are answered.
- d) On completion of the exam, the student must hand over the answer sheet to the invigilator.

Section A (Reading) -20 Marks

A1. Read the passage carefully and answer the questions.

Every day, at noon, Madhu would sit under a banyan tree and eat his lunch. One day, as he was eating, an old man came. Madhu felt sorry for him and shared his food with him. The old man was so happy that as he was leaving, he said, “My child, you have been so kind. In return, you can wish for anything from this tree and it will be granted.” Madhu felt very happy.

i. **Choose the correct answer and fill in the blanks.** (1M)

An _____ came, when Madhu was eating his lunch.

- a. tree b. old man c. child

ii. **Find the opposites from the passage.** (2x1M=2M)

a. over x _____

b. cruel x _____

iii. **Make correct words-** (1M)

d r n e t a g- _____ n u r t e r- _____

iv. **Where would Madhu have his lunch?** (1M)

Ans. _____

A2. Read the passage carefully and answer the questions.

One evening, Rani heard her mother singing, “ Chanda mama door ke...”

Hearing this, Rani asked her mother, “Amma, how far is the Moon? Amma said, “Rani, the moon is very far in the sky.”

Rani kept on thinking about the moon and fell asleep.

The next morning Rani woke up hearing the loud voice of her elder brother, Pratik. He was pointing to the TV and shouting in excitement, “Look Rani, India is on the Moon!”

i. Fill in the blanks.

(2x1M=2M)

a. _____ was singing.

b. _____ was Rani’s brother.

ii. How far is the moon according to Rani’s mother?

(1M)

Ans. _____

iii. Who said these words to whom?

“Amma, how far is the moon?”

(1M)

Ans. _____

iv. Find the word from the passage which means.

(1M)

a feeling of joy _____

A3. Read the passage carefully.

It is a story about John. He was the last farmer. He was the last

person on the earth who knew how to farm. The other people on earth had all forgotten how to do it. They were all too busy with their own lives to learn and earn. John wanted to teach them how to farm, but they didn't want to learn. They thought it was too much work. He always insisted that it was important to keep the earth healthy and to know where our food came from.

i. Complete the sentences.

(3M)

- a. This story is about _____
- b. John was _____.
- c. He was the last person on the earth _____.

ii. Choose the correct answer and fill in the blanks.

(2M)

- a. The other people on the earth had forgotten to do _____.
(farming / framing)
- b. The other people were busy with their own lives to learn and _____.
(farm / earn)

iii. Write True or False

(2M)

- a. John wanted to teach people how to be healthy. _____
- b. The other people were not interested in farming. _____

iv. Write the missing letters to make the correct words.

(2M)

e _ r _ h

t _ a _ h

v. What did John insist?

(1M)

Section B (Textual Questions) 10 Marks

B1. Choose the correct answer.

(2X1M=2M)

i. When the Sun sinks behind a distant hill, the whole world becomes _____ .

a. bright

b. dark

c. black

ii. On seeing his tears, the _____ helped Chanda Mama.

a. Sun

b. stars

c. hill

B2. Answer the following questions.

(4X2M=8M)

i. What did the King do playfully?

Ans. _____

ii. How do you know that Rani was very curious?

Ans. _____

iii. Who helped Chanda Mama?

Ans. _____

iv. What did Madhu enjoy?

Ans. _____

Section C (Creative Writing) -10 Marks

C1. Write a paragraph of five sentences on how you get ready to school using the clue words given in the box. (5M)

Help box-


breakfast	dress up	have bath	brush	arrange bag
-----------	----------	-----------	-------	-------------

C2. Look at the picture of the moon and write five sentences about it. (5M)

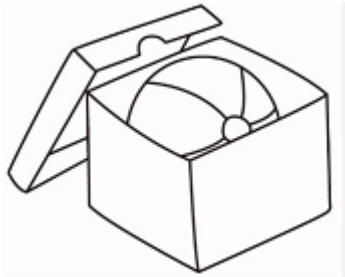


Section D (Grammar) - (15 Marks)

D1. Fill in the blanks using is / are. (2x1M=2M)



i. The fruits _____ arranged in the basket.



ii. My ball _____ inside the box.

D2. Write two words that begin with sp- / st words -

(1X1M=1M)

i. s p _____ s p _____

D3. Use 'a' or 'an' and fill in the blanks.

(3x1M=3M)

i. We are going to buy _____ new car.

ii. There is _____ apple on the table.

iii. I bought _____ pen and _____ eraser.

D4. Combine the given sentences using 'and' or 'but'

(2x1M=2M)

i. Anitha has a bicycle.

Anitha has a car.

ii. Pranav wants to play cricket.

Prem wants to watch television.

D5. Fill in the blanks with the correct gender.

(2X1M=2M)

i. bull - _____


ii. peacock - _____

D6. Fill in the blanks with here / there.

(2X1M=2M)

i. The bird _____ is near the tree.



ii.  This bicycle _____ is mine.

D7. Fill in the blanks by forming words using 'sk', 'sw' and 'sp'.

(3X1M=3M)

i. I like to play in _____.

ii. Meena loves to wear _____ .

iii. We should avoid using plastic _____.

Section E (Vocabulary)-10 Marks

E1. Write suitable describing words for the given words. (2X1M=2M)

_____ boy

_____ moon

E2. Rearrange the words to make correct sentences. (2x1M=2M)


i. peeped / clouds / behind / the / out / the Sun / from

Ans. _____

ii. no / food / everywhere / was / there / water / but

Ans. _____

E3. Add 'Sun' to the given words to make new words given. (3X1M=3M)



light	shine	glasses
-------	-------	---------

i. _____ ii. _____ iii. _____

E4. Write the antonym (opposite word) — (2X1M=2M)

i. best X _____ ii. remember X _____

E5. Write a sentence with the word. (1M)

i) excitement- _____

Section F (Spellings) - 10 Marks

F1. Make correct words from the jumbled letters. (2x1M=2M)

i. t e g d i f- _____ ii. k e o t c s r- _____

F2. Write the words that rhyme with the following-- (2X1M=2M)

i. hill - _____ ii. cold - _____

F3. Fill in the missing letters to make meaningful words. (3M)

c _ _ n _ _ u _ _ e d

i _ _ s _ _ e _ _ d

F4. Encircle the correct spelling words. (3x1M=3M)

jorney

journey

jouerney

scientist

scientest

scentist

threew

thriw

threw

Section G (Handwriting) - 5 Marks

G. Write the given paragraph in a neat and clean handwriting. (5M)

Honesty and kindness are the two ways of expressing love to humankind. By being born as humans, we are gifted with the advantages of perceiving, thinking, choosing, and acting according to our own objectives to make our lives better. We are provided with the power to enjoy our lives. Like that, everyone around us also enjoy the same power. We have to use the advantages of being human for the goodness of our lives and for others.

[illegible]

[illegible]



परमाणु ऊर्जा शिक्षण संस्था

Atomic Energy Education Society

वार्षिक परीक्षा /Annual Examination Practice paper-1

कक्षा/Class : III

अवधि/Time: 3 hours

विषय/Subject :हिंदी

अधिकतम अंक/Maximum Marks : 80

विद्यार्थी द्वारा भरा जाए /To be filled by the student

अद्वितीय परीक्षा क्रमांक / Unique Examination No.: _____

कक्ष/ अनुभाग Class /Sec.: _____ **दिनांक / Date:** _____

परीक्षा का दिन / Day of Examination: _____

विद्यालय का नाम / Name of the School: _____

हस्ताक्षर निरीक्षक(दिनांक सहित)/Invigilator's Sign(With date) : _____

अध्यापकों द्वारा भरा जाए / To be filled by the teacher

प्राप्तांक / Marks Obtained

पूर्णांक / Total Marks

हस्ताक्षर परीक्षक (दिनांक सहित) / Examiner's Sign (with date) : _____

हस्ताक्षर जाँचकर्ता (दिनांक सहित) / Cross Checker Sign(with date) _____

हस्ताक्षर परीक्षा प्रभारी (दिनांक सहित) / Exam I/C Sign (with date) _____

सामान्य निर्देश/ General Instruction:

- 1) प्रत्येक प्रश्न के सामने अंक दर्शाए गए हैं ।
- 2) प्रत्येक प्रश्न को ध्यान से पढ़ें और उचित उत्तर दें ।
- 3) सुनिश्चित करें कि प्रत्येक खंड के प्रश्नों का उत्तर दिया गया है ।
- 4) छात्र को यह सुनिश्चित करना चाहिए कि उत्तर पुस्तिका क्षतिग्रस्त या मुड़ी हुई नहीं है ।

प्रश्न.1-निम्नलिखित गद्यांश को पढ़कर सही विकल्प पर सही का निशान (✓)

लगाओ-

(5)

श्रीमती थिमक्का हुलिकल और कुदुर के बीच स्थित 45 किलोमीटर लंबे राजमार्ग पर लगभग 385 बरगद के पेड़ लगाने के लिए विख्यात है। इसके अतिरिक्त उन्होंने अनेक स्थानों पर पेड़ लगाए, जिनकी संख्या 8000 से अधिक है। इससे पर्यावरण को बहुत लाभ हुआ। इस कार्य में उन्हें उनके पति ने भी पूरा सहयोग दिया। उनके इस महत्वपूर्ण काम के लिए भारत सरकार ने उन्हें वर्ष 2019 में पद्मश्री से सम्मानित किया।

i) श्रीमती थिमक्का ने 45 किलोमीटर लंबे राजमार्ग पर कौन से पेड़ लगाए ?

क) बरगद

ख) पीपल

ग) नीम

घ) नारियल

ii) हुलिकल और कुदुर के बीच में कितने किलोमीटर की दूरी है ?

क) 35 किलोमीटर

ख) 45 किलोमीटर

ग) 55 किलोमीटर

घ) 65 किलोमीटर

iii) श्रीमती थिमक्का को पेड़ लगाने के कार्य में किसने सहयोग दिया ?

क) पिता ने

ख) भाई ने

ग) बेटे ने

घ) पति ने

iv) 2019 में भारत सरकार ने श्रीमती थिमक्का को किस सम्मान से सम्मानित किया ?

क) पद्म विभूषण।

ख) भारत रत्न

ग) पेड श्री

घ) पद्म श्री

v) विलोम शब्द लिखो-

लाभ -

प्रश्न-2 निम्नलिखित गद्यांश को पढ़कर नीचे लिखे प्रश्नों के उत्तर लिखिए- (5)

एक किसान अपना खेत जोत रहा था । अचानक कहीं से एक भालू आ गया। भालू किसान को मारने झपटा। किसान ने कहा “मुझे क्यों मारते हो ? उपज होने दो, जो कहोगे, वही खिलाऊँगा”। भालू ने कहा , “भूमि के ऊपर की उपज मेरी और नीचे की तुम्हारी रहेगी”। किसान ने भालू को बो दिए। उपज हुई तो भालू को पत्ते खाने को मिले । भालू चिढ़कर रह गया।

i) किसान क्या कर रहा था?

.....
.....

ii) किसान पर कौन झपटा?

.....
.....

iii) किसान ने खेत में क्या बोया?

.....
.....

iv) समान अर्थ लिखो-

भूमि -

v) वचन बदलो-

पता -

प्रश्न 3 - निम्नलिखित अपठित गद्यांश को पढ़कर उत्तर लिखो- (10)

पानी को हम जल , नीर आदि नाम से भी जानते हैं। जल की कोई गंध नहीं होती है। जल दिखने में पारदर्शी होता है। पानी को गर्म करने पर वह भाप बन जाता है और ठंडा करने पर बर्फ बन जाता है । साफ जल का उपयोग हमें बीमारियों से बचाता है । जल के बिना जीवन संभव नहीं है । पानी का उपयोग खाने में ,पीने के पानी के अलावा हमारे दैनिक कार्य ,कृषि, विभिन्न उद्योगों के लिए किया जाता है । आश्चर्य की बात यह है कि पृथ्वी पर 71% पानी मौजूद होने के बाद भी केवल एक प्रतिशत ही पानी पीने लायक है । इसलिए जल संरक्षण बहुत जरूरी है।

i) जल दिखने में कैसा होता है?

.....
.....

ii) जल की गंध कैसी होती है?

.....
.....

iii) बीमारियों से बचने के लिए कैसा जल पीना चाहिए?

.....
.....

iv) पानी का उपयोग खाने में, पीने के पानी के अलावा किन कार्यों में किया जाता है?

.....
.....
.....
.....

v) पृथ्वी पर कितने प्रतिशत पानी पीने लायक है?

.....
.....

vi) पानी के दो समान अर्थ लिखो?

.....
.....

नीचे लिखे प्रश्नों को पढ़ो और सही उत्तर पर सही (✓) का निशान लगाओ-

vii) पानी गर्म करने पर क्या होता है ?

क) बर्फ बन जाता है। ()

ख) भाप बन जाता है। ()

ग) कोहरा बन जाता है। ()

घ) हवा बन जाता है। ()

viii) इनमें से कौन पानी से बना हैं?

क) बर्फ ()

ख) हवा ()

ग) आसमान ()

घ) मिट्टी ()

ix) पृथ्वी पर कितने प्रतिशत पानी है?

क) 61% ()

ख) 71% ()

ग) 81% ()

घ) 91% ()

x) उल्टे अर्थ वाला शब्द लिखो।

साफ़ -

प्रश्न 4 - नीचे लिखे प्रश्नों के उत्तर एक या दो वाक्य में लिखो।

(2x4=8)

i) हिमालय को सुंदर मुकुट क्यों कहा गया है?

.....

.....

.....

.....

.....

ii) अम्मा ने बरगद के पौधे लगाने क्यों शुरू किए थे?

.....

.....

.....

.....

iii) 'हम अनेक हैं किंतु एक हैं', उदाहरण देकर इस बात को समझाइए।

.....

.....

.....

.....

.....

.....

iv) गेहूँ की उपज में से भालू को क्या मिला और किसान को क्या मिला?

.....

.....

.....

.....

.....

प्रश्न 5- प्रश्नों के उत्तर एक वाक्य में लिखो।

1x2=2

i) किसान खेतों को जोतने के लिए किसका सहारा लेते हैं?

.....
.....

ii) वैज्ञानिक चांद पर क्यों जाना चाहते हैं?

.....
.....

प्रश्न 6- किसी एक विषय पर पांच वाक्य लिखो।

(5)

किसान या पेड़

.....
.....
.....
.....
.....
.....
.....

प्रश्न 7- अपने देश भारत के बारे में पाँच वाक्य लिखो।

(5)

.....
.....
.....
.....
.....
.....
.....

प्रश्न 8- क) नीचे लिखे वाक्यों में उचित विराम चिन्ह लगाओ। (1x15=15)

(I ! ?)

i) आप कहाँ जा रहे हो

ii) अचानक वह चीख उठी, साँप

iii) मैं चित्र बना रही हूँ

ख)- वचन बदलो।

i) पुत्री -

ii) पुस्तक -

iii) नदी -

iv) पौधा -

ग) - द्वित्व व्यंजन छाँट कर लिखो -

अच्छा , अम्मा , नन्हा , रस्सी , रत्न ,

i)

ii)

घ)- नीचे लिखे शब्दों में से संज्ञा छाँट कर लिखो-

घोड़ा, वह, उनको, सिमरन,

i)

ii)

ड) - विलोम शब्द लिखो -

i) अँधेरा -

ii) कम -

च)- नीचे लिखे शब्दों का वाक्य में प्रयोग करो-

i) भूख

.....
.....

ii) आकाश-

.....
.....

प्रश्न 9 - क) - तुक वाले शब्द लिखो-

(1x10=10)

i) गोला -

ii) काम -

iii) भालू -

ख) - नीचे लिखे अक्षरों वाले शब्द लिखो-

i) त्र -

ii) ज्ञ -

ग) - समान अर्थ वाले शब्द लिखो-

i) चंद्रमा -

ii) माँद -

iii) कंठ-

घ)- सही शब्द लिखकर वाक्य पूरा कीजिए-

लगातार परिश्रम करने से कठिन काम भी ----- हो जाता है।

ड)- नीचे लिखे मुहावरे का वाक्य में प्रयोग करो-

पाठ पढ़ाना -----

प्रश्न x- क) गलत मात्रा हटाकर सही मात्रा लगाओ - (1x10=10)

i) वैज्ञानीक - ----- ii) कठपूतली - -----

iii) पोथी - ----- iv) चीड़िया - -----

ख)- सही शब्द छाँटकर खाली स्थान में लिखो-

i) एक -----तक हाथ नहीं लगा। (चुहा / चूहा)

ii) हम रस्साकशी के खेल में ----- गए। (जीत / जित)

iii) तब उन्होंने दूसरा-----भेजा । (रोकेट / रॉकेट)

iv) कल-----वहाँ गया था । (मैं / में)

ग) - चंद्रबिंदु वाले दो शब्द लिखो-

i)

ii).....

प्रश्न 11- नीचे लिखे गद्यांश को सुंदर अक्षरों में लिखो- (5)

पेड़ हँसने लगा, “मैं समझ गया। तुम सोचती हो कि मैं आराम से खड़ा रहता हूँ, बस !”
“सुनो” पेड़ ने कहा, “मेरे शरीर का तो हर अंग दिन रात काम करता है । जड़े मिट्टी से पानी खींचती हैं। पत्ते दिन भर खाना बनाते हैं और इतने परिश्रम के बाद जो फल उगते हैं, वे भी हम तुम्हें दे देते हैं।



परमाणु ऊर्जा शिक्षण संस्था
Atomic Energy Education Society

वार्षिक परीक्षा /Annual Examination Practice paper-2

कक्षा/ Class : III

अवधि / Duration :3 घंटे

विषय/Subject : हिंदी

अधिकतम अंक / Maximum Marks : 80

विद्यार्थी द्वारा भरा जाए / To be filled by the Student

अद्वितीय परीक्षा क्रमांक/ Unique Examination No: _____

कक्षा / अनुभाग Class /Sec.: _____ दिनांक / Date: _____

परीक्षा का दिन / Day of Examination: _____

विद्यालय का नाम/ Name of the School: _____

हस्ताक्षर निरीक्षक (दिनांक सहित) / Invigilator's Sign. (With date): _____

अध्यापकों द्वारा भरा जाए / To be filled by the Teachers

प्राप्तांक / Marks Obtained

पूर्णांक /Total Marks

हस्ताक्षर परीक्षक (दिनांक सहित) / Examiner's Sign. (With date): _____

हस्ताक्षर जाँचकर्ता (दिनांक सहित) / Cross Checker's Sign. (With date): _____

हस्ताक्षर परीक्षा प्रभारी (दिनांक सहित) / Exam I/C Sign. (With date): _____

सामान्य निर्देश /General Instructions:

सभी प्रश्नों के उत्तर निर्देशानुसार लिखिए।

स्वच्छता एवं सुंदर लेख का विशेष ध्यान रखें।

(भाग-1) पठन क्षमता पर आधारित प्रश्न - (20 अंक)

1. नीचे लिखे गए पठित गद्यांश को पढ़कर पूछे गए प्रश्नों के उत्तर लिखो।(5)

फूलदेई उत्तराखंड का एक प्रसिद्ध त्यौहार है। यह त्यौहार बच्चों द्वारा मनाया जाता है, इसलिए इसे 'बाल पर्व' भी कहा जाता है। यह चैत्र मास की संक्रांति के दिन मनाया जाता है। चैत्र माह हिंदू नववर्ष का पहला महीना होता है। फूलदेई वसंत ऋतु के आगमन का प्रतीक है। चैत्र ऋतु आते ही ऊँची-ऊँची पहाड़ियों से बर्फ पिघलने लगती है।

(क) फूलदेई को बाल पर्व क्यों कहा जाता है? (1)

(ख) फूलदेई पर्व कब मनाया जाता है? (1)

(ग) फूलदेई कहाँ का प्रसिद्ध त्यौहार है? सही उत्तर पर गोला लगाइए। (1)

उत्तर प्रदेश

उत्तराखंड

गुजरात

(घ) इन शब्दों के अर्थ लिखिए । (1)

प्रसिद्ध - -----

पर्व - -----

(ङ) वाक्य पूरा करो। (1)

फूलदेई ----- ऋतु के आगमन का प्रतीक है।

2.नीचे लिखे गए पठित गद्यांश को पढ़कर पूछे गए प्रश्नों के उत्तर लिखो। (5)

ये श्रीमती थिमक्का हैं। थिमक्का को 'अम्मा' और 'वृक्ष माता' के नाम से भी जाना जाता है। इनका जन्म कर्नाटक के तुमकुरु जिले में हुआ था। ये कर्नाटक में ही रहती हैं। पिछले ८0 वर्षों से थिमक्कासड़कों के किनारे पौधे लगा रही हैं। पैसे की कमी के कारण अम्मा ने आरंभ में एक खान में श्रमिक के रूप में काम किया था।

(क) थिमक्का को और किस-किस नाम से जाना जाता है? (1)

(ख) थिमक्का कहाँ रहती हैं? (1)

(ग) थिमक्का' में 'क्का' आया है। ऐसे व्यंजनों को द्वित्व व्यंजन कहते हैं। ऐसे दो और शब्द लिखिए - (1)

(घ) श्रमिक शब्द के सही अर्थ को गोला लगाइए। (1)

पैसा

आराम

मजदूर

(ङ) अम्मा का जन्म कहाँ हुआ था? (1)

3. नीचे लिखे गए अपठित गद्यांश को पढ़कर पूछे गए प्रश्नों के उत्तर लिखो।(10)

एक बार की बात है, एक जंगल में एक चूहा रहता था। एक दिन वह अपने बिल की ओर लौट रहा था, तो उसने एक गुफा में शेर को आराम करते देखा। वह शेर की गुफा में घुसा और शेर पर चढ़ गया। वह शेर पर उछल-कूद करने लगा।

चूहे की शरारत से शेर की नींद खुल गई और उसने चूहे को अपने तीखे पंजे में दबोच लिया। चूहा बुरी तरह डर गया और रो-रोकर शेर से विनती करने लगा, “शेर जी, मुझे मत मारो, मुझसे भूल हो गई, मुझे जाने दो।” चूहे की बात सुनकर शेर हँसने लगा।

(क) गुफा में कौन आराम कर रहा था ? (1)

(ख) चूहा कहाँ रहता था? (1)

(ग) दिन का समानार्थी शब्द क्या होगा? सही उत्तर पर गोला लगाइए। (1)

महीना

वर्ष

दिवस

(घ) शेर की नींद क्यों खुल गई? (1)

(ङ) विलोम शब्द लिखिए: (1)

हँसना -----

चढ़ना -----

(च) वचन बदलो (1)

पंजा - -----

(छ) चूहा शेर पर क्या करने लगा? सही उत्तर पर गोला लगाइए। (1)

सोने लगा उछल कूदकरने लगा रोने लगा

(ज) लिंग बदलो। (1)

शेर -चूहा -----

(झ) वाक्य पूरा करो। (1)

चूहा बुरी तरह ----- और शेर से ----- करने लगा।

(ट) जंगल का अर्थ क्या होता है? सही उत्तर पर गोला लगाइए। (1)

वन

वृक्ष

पानी

(भाग-2) पाठ्य पुस्तक पर आधारित प्रश्न- 10 अंक

4. निम्नलिखित प्रश्नों के उत्तर लिखो।

(क) सिंह माँद यानी गुफा में रहता है। माँद में कौन-कौन से जानवर रहते हैं?(1)

(ख) नौ मन आटा किसमें निकला? (1)

(ग) भालू ने दूसरी बार नीचे की उपज क्यों माँगी? (2)


(घ) ऐसे चार खेलों के नाम बताइए जिनमें दो टीमों आमने-सामने होती हैं? (2)

(ङ) आप किस देश में रहते हैं? आपका प्रदेश कौन-सा है? (2)

(च) शहद हमारे किस-किस काम आता है कोई भी दो काम लिखिए। (2)

(भाग-3) रचनात्मक लेखन पर आधारित प्रश्न - 10 अंक

5. (क) नीचे दिए गए चित्र को देखकर पाँच वाक्य लिखो। (5)



(ख) आपका सबसे प्रिय खेल कौन-सा है? उसके बारे में पाँच पंक्तियाँ लिखिए (5)

(भाग-4) व्याकरण पर आधारित प्रश्न - 15अंक

6. (क) नीचे दिए गए वाक्यों में उचित विराम चिन्हों का उपयोग कर वाक्य ठीक कीजिए । (2)

मेज़ पर आम अनार चीकू और सेब रखे हैं नेहा उन्हें खाना चाहती है

(ख) तुक मिलाने वाले शब्द लिखिए । (2)

जोश - ----- सवारी - -----

प्यारा - ----- रंग - -----

(ग) निम्नलिखित में से संज्ञा शब्दों को छाँट कर लिखिए- (2)

सिमरन बगीचे में बैठी है । -----

पेड़ पर सुंदर फल लगे हैं। -----

(घ) वाक्य को ठीक करके लिखो। (1)
भालू का सिर चकरा गई।

(ङ) दिए गए मुहावरे का अर्थ लिखकर उसका वाक्य में प्रयोग कीजिए (2)
पाठ पढ़ाना
अर्थ –

वाक्य-

(च) सयुंक्त अक्षर बनाइए। (1)
क् + ष = त् + र =

(छ) कुछ शब्दों के एक से अधिक अर्थ होते हैं। नीचे दिए गए शब्दों के दो सही
अर्थ ढूंढ कर लिखिए। (2)

पानी	दिशा	जवाब	संसार	परिणाम	जलना
------	------	------	-------	--------	------

उत्तर

जल

(ज) सही अर्थ की जोड़ी बनाइए। (2)

एक चूहा तक हाथ नहीं लगा

भाग गया

सियार वहां से चंपत हो गया

कोई शिकार नहीं मिला

(झ) अपने मन से वाक्य बनाइए। (1)

उदाहरण - यदि चुप रहा तो हाथ आया शिकार भी निकल जाएगा।

यदि अँधेरा हुआ तो

(भाग-5) शब्दावली पर आधारित प्रश्न- 10 अंक

7. (क) विलोम शब्द लिखकर रिक्त स्थान भरिए- (1)

१) मैं बूढ़ा हो गया हूँ। पहले तो मैं ----- था ।

२) लगातार परिश्रम करने से कठिन काम भी ----- हो जाता है।

(ख) नीचे दिए गए वाक्यों के लिए एक सही शब्द लिखिए । (1)

शिक्षा देने वाले- -----

विज्ञान की नई खोज करने वाले -----

(ग) नया शब्द बनाइए (1)

१) यान जोड़कर शब्द बनाइए चंद्र- -----

२) भूमि जोड़कर शब्द बनाइए – मातृ -----

(घ) शब्दों का सही अर्थ के साथ मिलान कीजिए । (2)

कंठ दरवाज़ा

गुफा गला

पहनावा माँद

द्वार वेशभूषा

(ङ) वचन बदलो। (1)

गुब्बारा -----

मधुमक्खी -----

(च) ऐसी कोई भी दो सब्जियों के नाम लिखिए जो भूमि के नीचे पैदा होती हैं।(1)

(छ) चाँद के दो और नाम दिए गए स्थान में लिखिए । (1)



(ज) कोई भी दो चंद्रबिंदु (ँ) वाले शब्द लिखिए । (1)

(झ) नीचे दिए गए शब्दों की मात्रा हटाइए और नया शब्द बनाइए । (1)

उदा ० काम - कम

बीस ----- यही -----

(भाग-6) वर्तनी पर आधारित प्रश्न- 10अंक

8. (क) नीचे लिखे अक्षरों के क्रम को व्यवस्थित करके सही शब्द लिखिए । (2)

रा / टा / पि- -----

न / कि / सा - -----

ती / य / भा / र - -----

ण / क्षि / द - -----

(ख) शब्दों को शुद्ध करके लिखो। (2)

अवशय - ----- पर्यावरण - -----

नारीयल - ----- चीड़िया - -----

(ग) सही शब्द पर गोला लगाओ।

(2)

सीयार

सियार

स्यार

पिरश्रम

परिसम

परिश्रम

(घ) उचित शब्द लिखकर कविता की पंक्ति पूरी करो।

(2)

भारत तू है हमको _____

तू है सब _____ से न्यारा

मुकुट _____ तेरा सुंदर

धोता तेरे _____ समुंदर

(ङ) चित्रों को देखकर खेल का नाम लिखिए।

(2)





(भाग-7) सुलेख- 5अंक

9. नीचे लिखे अनुच्छेद को सुंदर अक्षरों में लिखो।

(5)

अनुशासन मनुष्य के जीवन में महत्वपूर्ण भूमिका निभाता है। यह एक गुण है जो सफलता के मार्ग में मदद करता है। अनुशासन सही दिशा देता है, समय की अच्छी व्यवस्था करता है। अनुशासन के द्वारा हम समय प्रबंधन, कार्यों की नियमितता, स्वस्थ जीवनशैली और संयंत्रित सोच का पालन कर सकते हैं। अनुशासन का

This image shows a full page of white paper with horizontal dashed lines, typical of primary-ruled notebook paper. The lines are evenly spaced and run across the width of the page. There are no margins, text, or other markings present.

Page 12 of 12



परमाणु ऊर्जा शिक्षण संस्था
Atomic Energy Education Society

वार्षिक परीक्षा / Annual Examination Practice paper-3

कक्षा / Class : तीसरी

अवधि / Duration : 3 घंटे

विषय / Subject : हिंदी

अधिकतम अंक / Maximum Marks : 80

विद्यार्थी द्वारा भरा जाए / To be filled by the Student

अद्वितीय परीक्षा क्रमांक / Unique Examination No: _____

कक्षा / अनुभाग Class / Sec.: _____ दिनांक / Date: _____

परीक्षा का दिन / Day of Examination: _____

विद्यालय का नाम / Name of the School: _____

हस्ताक्षर निरीक्षक (दिनांक सहित) / Invigilator's Sign. (With date): _____

अध्यापकों द्वारा भरा जाए / To be filled by the Teachers

प्राप्तांक / Marks Obtained

पूर्णांक / Total Marks

हस्ताक्षर परीक्षक (दिनांक सहित) / Examiner's Sign. (With date): _____

हस्ताक्षर जाँचकर्ता (दिनांक सहित) / Cross Checker's Sign. (With date): _____

हस्ताक्षर परीक्षा प्रभारी (दिनांक सहित) / Exam I/C Sign. (With date): _____

सामान्य निर्देश / General Instructions:

*सभी प्रश्न करने अनिवार्य हैं ।

*प्रश्नों के अंक उनके सामने अंकित हैं।

(पठन क्षमता पर आधारित प्रश्न)

प्रश्न 1 निम्नलिखित गद्यांश को पढ़कर नीचे लिखे प्रश्नों के उत्तर लिखिए।

"लेकिन इन चिड़ियों की मौज है।" सिमरन ने चिड़ियों को दाना खाते देखकर कहा, "हाँ, मैं भी चिड़िया बन जाती तो ठीक था।"

"ना, ना! यह क्या सोच रही हो?" एक चिड़िया बोली, "एक-एक दाना ढूँढ़ते-ढूँढ़ते सारे दिन उड़ती हूँ मैं। घोंसला बनाने के लिए भी बहुत परिश्रम करना पड़ता है, और..."

सिमरन बोली, "बस, बस ! मैं समझ गई।" वह सोचने लगी, "परिश्रम से ही सब जीते हैं। मुझे भी परिश्रम करना चाहिए और मन लगाकर पढ़ना चाहिए।"

उसने अपनी पुस्तकें उठाईं और उत्साह से स्कूल का काम करने बैठ गई।

क) "हाँ, मैं भी चिड़िया बन जाती तो ठीक था।" किसने कहा ? (1)

.....

ख) सिमरन बोली, "बस, बस ! मैं समझ गई।" सिमरन क्या समझ गई ? (1)

.....

ग) पूरा करो। (1)

उसने अपनी पुस्तकें उठाईं और से स्कूल का काम करने बैठ गई।

घ) विपरीत अर्थ वाला शब्द लिखो। रात * (1)

ड) दिए गए शब्द का वचन बदलिए । पुस्तक - (1)

प्रश्न 2 निम्नलिखित गद्यांश को पढ़कर नीचे लिखे प्रश्नों के उत्तर लिखिए ।

एक जंगल में खरनखर नाम का एक सिंह रहता था । एक दिन उसे बहुत भूख लगी । वह आहार की खोज में पूरे जंगल में घूमता रहा, पर एक चूहा तक हाथ नहीं लगा । इसी खोज में शाम हो गई । अँधेरा हो रहा था । इस समय उसे एक माँद दिखाई दी । रात काटने के लिए वह उसी में घुस गया । उस माँद में घुसकर उसने सोचा, इसमें कोई न कोई पशु तो रहता ही होगा । जब वह विश्राम करने के लिए इसमें घुसेगा, मैं उसे दबोच लूँगा । यह सोचकर वह उसी माँद में एक ओर छिपकर बैठ गया ।

क) यह गद्यांश किस पाठ से लिया गया है ? पाठ का नाम लिखो । (1)

.....

ख) जंगल में किस नाम का एक सिंह रहता था ? (1)

.....

ग) रात काटने के लिए सिंह कहाँ घुस गया ? (1)

.....

घ) समान अर्थ वाला शब्द लिखो। विश्राम =

(1)

ड) विलोम शब्द लिखो । अँधेरा x

(1)

प्रश्न 3 निम्नलिखित अपठित गद्यांश को पढ़कर नीचे लिखे प्रश्नों के उत्तर लिखिए ।

सुरेश और नितिन पक्के मित्र थे। वे दोनों ही दूसरी कक्षा में पढ़ते थे। वे पढ़ाई में एक-दूसरे की मदद करते थे। एक दिन वे मेला देखने गए। वहाँ बहुत से झूले थे। खाने-पीने की दुकानें थीं। कुछ लोग बतख के आकार की नाव में बैठकर मज़ा ले रहे थे। नितिन भी उसमें बैठना चाहता था। लेकिन उसके पास खुले पैसे नहीं थे। सुरेश ने टिकट के लिए बीस रूपए दिए। नितिन ने उसे धन्यवाद दिया।

क) सुरेश और नितिन कैसे मित्र थे ? (1)

.....

ख) सुरेश और नितिन दोनों कौनसी कक्षा में पढ़ते थे ? (1)

.....

ग) एक दिन सुरेश और नितिन क्या देखने गए ? (1)

.....

घ) सुरेश ने टिकट के लिए कितने रूपए दिए ? (1)

.....

ङ) वाक्य पूरा करो । (1)

कुछ लोग के आकार की नाव में बैठकर मज़ा ले रहे थे।

च) नीचे लिखे वाक्य के सामने सही (✓) या गलत (X) का निशान लगाइए । (1)

नितिन ने टिकट के लिए बीस रूपए दिए। सुरेश ने उसे धन्यवाद दिया।
.....

छ) समान तुक वाला शब्द लिखो । मेला - (1)

ज) वचन बदलो । झूला - (1)

झ) समान अर्थ वाला शब्द लिखो । मदद = (1)

ञ) विलोम शब्द लिखो । दिन x (1)

(पाठ्य पुस्तक पर आधारित प्रश्न)

प्रश्न 4 निम्नलिखित प्रश्नों के उत्तर लिखो । (पद्य भाग)

क) किसान खेतों को जोतने के लिए किसका सहारा लेते हैं ? छाँटकर लिखो । (1)

(कुत्ता / बाघ / बैल)

ख) कोई दो खेलों के नाम लिखो जिन्हें आप खेलते हैं । (2)

i)

ii)

ग) भारत हमें क्यों प्यारा है ? (2)

.....
.....

प्रश्न 5 निम्नलिखित प्रश्नों के उत्तर लिखो । (गद्य भाग)

क) चाँद पर जाने के लिए किस वाहन का प्रयोग किया जाता है ? (1)

(बस / रॉकेट / हवाई जहाज़)

ख) थिमक्का को और किस-किस नाम से जाना जाता है ? दो नाम लिखो । (2)

i)

ii).....

ग) फूलदेई को बाल पर्व क्यों कहा जाता है ? (2)

.....
.....

(रचनात्मक लेखन पर आधारित प्रश्न)

प्रश्न 6 क) आप अपनी इच्छा से एक दिन के लिए कुछ भी बन सकते तो आप

क्या बनते ? कल्पना कीजिए और लिखिए । (5)

मैं एक.....बनता/बनती,क्योंकि.....

.....

ख) चित्र देखकर पाँच वाक्य लिखो ।

(5)



(व्याकरण पर आधारित प्रश्न)

प्रश्न 7 क) नामवाले शब्दों को ढूँढ़कर रिक्त स्थानों में लिखिए । (3)

(सिमरन, लिखना, चिड़िया, उड़ना, पुस्तक, पढ़ना)

i) ii)..... iii).....

ख) उदाहरण अनुसार नए शब्द बनाइए । (2)

उदाहरण- मातृ + भूमि = मातृभूमि

i) पितृ + भूमि =

ii) रण + भूमि =

ग) चंद्रबिंदु (ँ) वाले दो शब्द छाँटकर खाली जगह में लिखिए । (2)

उसकी दहाड़ से वह माँद तो गूँज ही उठी, आस-पास के पशु भी चौकन्ने हो गए ।

i) ii).....

घ) नीचे लिखे शब्दों की सहायता से वाक्य पूरा कीजिए । (2)

(पेड़ , तितली)

भूल गई

भूल गया

उदाहरण - माँद ! क्या तू भूल गई ? उदाहरण - जाल ! क्या तू भूल गया ?

.....! क्या तू भूल गई ?

.....! क्या तू भूल गया ?

ड) 'थिमक्का' में 'क्का' आया है। ऐसे व्यंजनों को द्वित्व व्यंजन कहते हैं। ऐसे और दो शब्द सोचकर दिए गए स्थान पर लिखिए । (2)

i)

ii)

च) नीचे दी गए वाक्यों में उचित विराम चिह्न लगाओ । (2)

i) भालू किसान पर झपटा ...

ii) मुझे क्यों मारते हो ...

छ) नीचे दिए गए मुहावरों का वाक्य में प्रयोग करो । (2)

पाठ पढ़ाना -

.....

.....

सिर चकराना -

.....

.....

(शब्द ज्ञान पर आधारित)

प्रश्न 8 क) कुछ शब्दों के एक से अधिक अर्थ भी होते हैं। नीचे दिए गए शब्द

जल के दो सही अर्थ ढूँढ़कर लिखिए । (2)

(फल, पानी, जलना, परिणाम)

उदाहरण- जग = संसार जागना

जल =

ख) जब एक हो तो 'गोला' कहलाता है और अनेक हों तो 'गोले'। नीचे दिए गए शब्दों को भी एक से अधिक मानकर उनके लिए शब्द लिखिए । (2)

एकवचन

बहुवचन

पिटारा -

.....

घोड़ा -

.....

ग) सही शब्द चुनकर रिक्त स्थान भरिये । (जवान, बाहर) (2)

उदाहरण - अँधेरा हो रहा था, उजाला हो रहा था।

i) सिंह इस समय भी माँद के भीतर है या निकल गया।

ii) मैं बूढ़ा हो गया हूँ । पहले तो मैं था।

घ) नीचे दिए गए शब्दों की मात्रा हटाइए और उसके सामने नया शब्द लिखिए ।(2)

उदाहरण - भार - भर

i) काम -

ii) बीस -

ड) नीचे दिए गए वाक्यों के लिए सही शब्द छाँटकर लिखिए । (2)

(वैज्ञानिक, चिकित्सक, कृषक, सैनिक, शिक्षक)

i) शिक्षा देने वाले -

ii) खेतों में अन्न उगाने वाले -

(वर्तनी पर आधारित प्रश्न)

प्रश्न 9 क) नीचे लिखे वाक्यों को शुद्ध करके लिखिए । (2)

i) इसी खोज में ही शाम हो गया ।

.....

ii) भालू किसान को मारने झपटी ।

.....

ख) नीचे लिखे अक्षरों के क्रम को व्यवस्थित करके सही शब्द लिखो । (2)

i) श / का / आ -

ii) ला / क / नि -

ग) निम्नलिखित शब्दों के छूटे हुए अक्षर लिखकर शब्दों को पूरा कीजिए । (3)

i) रस्सा ___ शी ii) मधु ___ कखी iii) कठपु ___ ली

घ) नीचे दिए गए शुद्ध शब्दों पर गोला लगाइए । (3)

i) परिश्रम	परीश्रम	परिस्रम
ii) राजमाग	राजमार्ग	राजर्माग
iii) हीमालय	हिमलय	हिमालय

(हस्तलेख पर आधारित प्रश्न)

प्रश्न 10 नीचे लिखे अनुच्छेद को सुंदर लेख में लिखिए । (5)

पुस्तकालय का अर्थ - पुस्तकें रखने का कक्ष । हर स्कूल और कॉलेज में पुस्तकालय होता है । पुस्तकालय में न केवल पुस्तकें होती हैं बल्कि अखबार, पत्र-पत्रिकाएँ, चार्ट आदि भी होते हैं । लोग पुस्तकालय में बैठकर मनपसंद किताबें, अखबार और पत्र-पत्रिकाएँ पढ़ते हैं । हमारे स्कूल में एक बड़ा पुस्तकालय है ।

.....

.....

.....

.....

.....

.....

.....

.....

.....

.....

.....

.....

.....



परमाणु ऊर्जा शिक्षण संस्था

Atomic Energy Education Society

वार्षिक परीक्षा /Annual Examination Practice paper-4

कक्षा / Class : तीसरी / 3 अवधि / Duration : 3 घंटे / hours

विषय / Subject : हिंदी / HINDI अधिकतम अंक/ Maximum Marks : 80

विद्यार्थी द्वारा भरा जाए / To be filled by the student

अद्वितीय परीक्षा क्रमांक/Unique Examination No_____

कक्षा / अनुभाग Class /Sec _____ दिनांक /Date : _____

परीक्षा का दिन/ Day of Examination : _____

विद्यालय का नाम/ Name of the School: _____

हस्ताक्षर निरीक्षक (दिनांक सहित)/Invigilator's Sign(With date:_____

अध्यापकों द्वारा भरा जाए / To be filled by the teachers

प्राप्तांक /Marks Obtained

पूर्णांक/Total Marks

हस्ताक्षर परीक्षक (दिनांक सहित)/Examiner's Sign(With date):_____

हस्ताक्षर जाँचकर्ता(दिनांक सहित)/Cross Checker's Sign(With date:_____

हस्ताक्षर परीक्षा प्रभारी(दिनांक सहित)Exam I/C Sign(With date): _____

सामान्य निर्देश:General Instructions : सभी प्रश्न अनिवार्य हैं ।

(भाग 1) पठन क्षमता पर आधारित प्रश्न -(20 अंक)

प्र. 1) निम्नलिखित गद्यांश को पढ़कर नीचे लिखे प्रश्नों के उत्तर लिखो ।(1×5=5)

एक जंगल में खरनखर नाम का एक सिंह रहता था। एक दिन उसे बहुत भूख लगी। वह आहार की खोज में पूरे जंगल में घूमता रहा, पर एक चूहा तक हाथ नहीं लगा। इस खोज में ही शाम हो गई। अँधेरा हो रहा था। इसी समय उसे एक माँद दिखाई दी। रात काटने के लिए वह उसी में घुस गया।

1. सिंह का नाम क्या था ? (1)

2. सिंह आहार की खोज में कहाँ घूमता रहा ? (1)

3. रात काटने के लिए सिंह किस में घुस गया ? (1)

4. उलटे अर्थ वाला शब्द लिखो । (1)

उजाला × -----

5. अर्थ लिखो ।

(1)

भोजन =

प्र. 2) निम्नलिखित गद्यांश को पढ़कर नीचे लिखे प्रश्नों के उत्तर लिखो ।(1×5=5)

एक किसान अपना खेत जोत रहा था। अचानक कहीं से एक भालू आ गया। भालू किसान को मारने झपटा। किसान ने कहा, “मुझे क्यों मारते हो? उपज होने दो, जो कहोगे, वही खिलाऊँगा।” भालू ने कहा, “भूमि के ऊपर की उपज मेरी और नीचे की तुम्हारी रहेगी।” किसान ने आलू बो दिए। उपज हुई तो भालू को पत्ते खाने को मिले। भालू चिढ़कर रह गया।

1) एक किसान क्या जोत रहा था?

(1)

.....

2) भालू किस को मारने झपटा?

(1)

.....

3) किसान ने क्या बो दिए?

(1)

.....

4) उलटे अर्थ वाला शब्द लिखो ।

(1)

ऊपर ×

5) उचित विराम चिन्ह दिए गए खानों में चुनकर लिखिए।

(1)

(! ? ।)

मुझे क्यों मारते हो

प्र. 3) निम्नलिखित गद्यांश को पढ़कर नीचे लिखे प्रश्नों के उत्तर लिखो।(1×10=10)

एक नमक बेचने वाला रोज़ अपने गधे पर नमक की थैली लेकर बाज़ार जाता था। रास्ते में उन्हें एक नदी पार करना पड़ता था। एक दिन नदी पार करते वक्त, गधा अचानक नदी में गिर गया और नमक की थैली भी पानी में गिर गई। चूँकि नमक से भरा थैला पानी में घुल गया और इसलिए थैला ले जाने के लिए बहुत हल्का हो गया। अब फिर गधा रोज वही चाल चलने लगा, इससे नमक बेचने वाले को काफ़ी नुक़सान उठाना पड़ता। नमक बेचने वाले को गधे की चाल समझ में आ गई और उसने उसे सबक सीखाने का फैसला किया।

1) नमक बेचने वाला किस पर नमक की थैली लेकर बाजार जाता था? (1)

2) रास्ते में उन्हें क्या पार करना पड़ता था? (1)

3) नमक से भरा थैला किस में घुल गया? (1)

4) नमक बेचने वाले को किस की चाल समझ में आ गई? (1)

5) उलटे अर्थ वाला शब्द लिखो । (1)

रात × -----

6) वचन बदलो । (1)

रास्ता -

7) खाली जगह भरो । (1)

गधा अचानक में गिर गया । (तालाब / नदी)

8) नीचे लिखे अक्षरों के क्रम को व्यवस्थित करके सही शब्द लिखो। (1)

म / क / न

9) नीचे लिखे शब्द से तुक मिलने वाला शब्द गद्यांश से ढूँढकर लिखो। (1)

मैला -

10) अर्थ लिखो । (1)

समय =

(भाग - 2) पाठ्य पुस्तक पर आधारित प्रश्न - (10 अंक)

प्र. 4) नीचे लिखे प्रश्नों के उत्तर एक या दो वाक्यों में लिखो। (2×4=8)

1) सिमरन क्यों थक गई थी? (2)

.....

.....

.....

2) थिमक्का को और किस - किस नाम से जाना जाता है। कोई भी दो नाम लिखो।(2)

.....

3) हिमालय को सुंदर मुकुट क्यों कहा गया है? (2)

4) “चल रहे मिला कदम” इस पंक्ति में किनके कदम मिलाकर चलने की बात कही गई है? (2)

प्र. 5) नीचे लिखे प्रश्नों के उत्तर एक वाक्य में लिखो। (1×2=2)

1) आपका प्रिय त्यौहार कौन-सा है? (1)

2) नीचे दी गई कविता की पंक्ति को पूरा करो । (1)
एक पिटारा हमने खोला ,

(भाग – 3) रचनात्मक लेखन पर आधारित प्रश्न – (10 अंक)

प्र. 6) “पेड़ों का महत्व” इस विषय पर पाँच वाक्य लिखो। निम्न बिंदुओं की मदद ले सकते हो।(छाया, हवा, फल, फूल, लकड़ी, घर, कागज, पर्यावरण, ऑक्सीजन, स्वस्थ)(5)

प्र.7) आपका सबसे प्रिय खेल कौन सा है? उसके बारे में पाँच वाक्य लिखो।(5)

(भाग – 4) व्याकरण पर आधारित प्रश्न – (15 अंक)

प्र.8) क) वचन बदलो । (2)

घोड़ा - गुब्बारा -

ख) नीचे दिए गए वाक्य में से संज्ञा (नाम वाला शब्द) ढूँढकर लिखो । (1)

सिमरन काम कर रही थी।।

ग) थिमक्का में “क्का ” आया है । ऐसे और दो शब्द सोचकर लिखो । (2)

घ) उचित विराम चिन्ह दिए गए खानों में चुनकर लिखिए। (2)

(! ? ।)

1. जानकी बहुत ही प्रसन्न थी

2. क्या हम चाँद पर जा सकते हैं

ड) वाक्य बनाओ । (1)

सिर चकराना -----

च) दिए गए मुहावरे का अर्थ लिखो। (1)

पाठ पढ़ाना-----

छ) दिए गए शब्द में चंद्रबिंदु (ँ) लगाकर शब्द फिर से लिखिए। (2)

चाद ----- ऊट -----

ज) तुक मिलनेवाले शब्द ढूँढकर लिखो । (2)

(खोला , दाना , भालू , अडाओ)

खाना ----- गोला -----

झ) सही अर्थ ढूँढकर लिखो। (2)

(वेशभूषा , सामने , गला , कई प्रकार के)

कंठ - ----- पहनावा - -----

(भाग 5) शब्दावली पर आधारित प्रश्न - (10 अंक)

प्र.9)क)नीचे दिए गए शब्दों की मात्रा हटाइए और उसके सामने नया शब्द लिखिए।
(2)

उदाहरण : भार ----- भर

काम - ----- बीस - -----

2) अर्थ लिखो । (2)

वृक्ष = ----- वन = -----

3) ' यान ' शब्द जोड़कर शब्द बनाइए। (2)

उदाहरण : चंद्र - चंद्रयान

वायु----- जल-----


4) नीचे दिए गए वाक्यों के लिए सही शब्द छाँटकर लिखिए। (2)

(कृषक , सैनिक , शिक्षक , वैज्ञानिक)

विज्ञान की नई खोज करने वाले-----

देश की रक्षा करने वाले-----

ड) नीचे दिए गए जानवरों के चित्र को पहचानिए और नाम लिखिए । (2)





(भाग - 6) वर्तनी पर आधारित प्रश्न - (10 अंक)

प्र. 10) क) नीचे लिखे अक्षरों के क्रम को व्यवस्थित करके सही शब्द लिखिए ।(2)

उदाहरण - डा / घो ---- घोड़ा

रा / पि / टा -----

श / का / आ -----

ख) सही क्रम में वाक्य लिखो ।

(2)

सिर / भालू / गया / का / चकरा ।

हम / देश / में / हैं / भारत / रहते ।

ग) नीचे दिए गए साग / सब्जियों को सही खानों में लिखो ।

(4)

(मेथी , आलू , गाजर , पालक , टमाटर)

साग वर्गीकरण का आधार	साग / सब्जी
भूमि के नीचे पैदा होने वाले	----- , -----
पत्ते के रूप में खाए जाने वाले	----- , -----

घ) नीचे दिए गए अशुद्ध शब्द को शुद्ध रूप में लिखिए ।

(2)

सीयार ----- यमूना -----

(भाग - 7) सुलेख पर आधारित प्रश्न - (5 अंक)

प्र. 11) नीचे लिखें अनुच्छेद को सुंदर अक्षरों में सुलेख लिखो।

(5)

आज के समय में साफ़ सफ़ाई बहुत ज़रूरी है क्योंकि आजकल साफ़ सफ़ाई नहीं रहने की वजह से बहुत सी बीमारियाँ फैल रही है । बीमारियों से बचने के लिए हमें हर स्थान को स्वच्छ रखना होगा । हमें हमेशा फटे हुए कागज और कूड़ा करकट हमेशा कूड़ेदान में ही डालना चाहिए । कभी भी इधर उधर नहीं फेंकना चाहिए ।

परमाणु ऊर्जा शिक्षण संस्था

Atomic Energy Education Society

वार्षिक परीक्षा / Annual Examination Practice paper-1

कक्षा / Class : III

अवधि / Duration : 3 Hours

विषय / Subject : Mathematics

अधिकतम अंक / Maximum Marks : 80

विद्यार्थी द्वारा भरा जाए / To be filled by the Student

अद्वितीय परीक्षा क्रमांक / Unique Examination No: _____

कक्षा / अनुभाग Class /Sec.: _____ दिनांक / Date: _____

परीक्षा का दिन / Day of Examination: _____

विद्यालय का नाम / Name of the School: _____

हस्ताक्षर निरीक्षक (दिनांक सहित) / Invigilator's Sign. (With date): _____

अध्यापकों द्वारा भरा जाए / To be filled by the Teachers

प्राप्तांक / Marks Obtained

पूर्णांक / Total Marks: 80

हस्ताक्षर परीक्षक (दिनांक सहित) / Examiner's Sign. (With date): _____

हस्ताक्षर जाँचकर्ता (दिनांक सहित) / Cross Checker's Sign. (With date): _____

हस्ताक्षर परीक्षा प्रभारी (दिनांक सहित) / Exam I/C Sign. (With date): _____

सामान्य निर्देश / General Instructions:

This paper consists of:

Section A : Knowledge -20 marks

Section B : Understanding -20 marks

Section C : Ability to Compute -20 marks

Section D : Problem Solving Ability -20 marks

All the questions are compulsory.

Section – A – KNOWLEDGE (20 Marks)

I. Choose the correct answer and fill in the blanks.

(1 × 6 = 6)

i) Numbers like 111,222,333 ... have _____ digits.

(one, two, three)

ii) _____ is the special number.

(479, 789, 974)

iii) $72 + 46 =$ _____

(108, 118, 128)

iv) $22 \times$ _____ = 2200.

(10, 100, 1000)

v) The number half of 12 is _____

(7, 6, 5)

vi) _____ is the double of 10.

(20, 30, 40)

II. Do as directed:

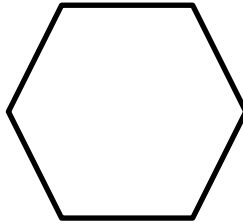


(2 × 5 = 10)

i) Write the missing numbers.

a) 4, _____, _____, 16, 20, 24.

b) 350, _____, 370, _____, 390.

ii) Divide the given pictures equally into four parts.




iii) Write the number names:

a) 234 = _____


b) 567 = _____

iv) Draw a line in the given picture to show that they are equally divided into two parts.

a)



b)



v) Write the appropriate numbers between which each of the given numbers lie.

Number

478

neighbouring hundreds

_____ and _____

872

_____ and _____

III. Solve the following:

(4 × 1 = 4)

The heights of five children are given below. Put them in ascending order.

Name of the Student	Height (in Centimetres)
Raju	120 cm
Gopal	98 cm
Sita	100 cm
Geeta	110 cm
John	106 cm

Section –B – UNDERSTANDING (20 Marks)

IV. Choose the correct answer and fill in the blanks.

(1 × 6 = 6)

i) 12 marbles is _____ of 6 marbles.

- a) half b) double c) quarter d) whole

ii) $14 \times 5 =$ _____

- a) 60 b) 70 c) 40 d) 30

iii) Aman has less than double of **four marbles**. So, he has _____ marbles.

- a) 4 b) 6 c) 8 d) 12

iv) 1 century = _____ years.

- a) 100 b) 50 c) 150 d) 200

v) 1 m = _____ cm.

- a) 25 b) 80 c) 100 d) 10

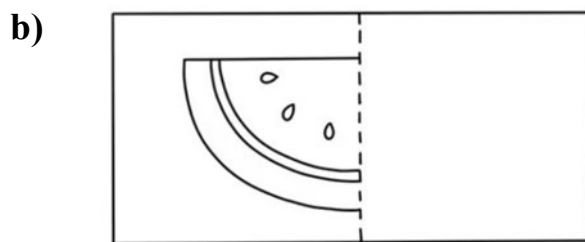
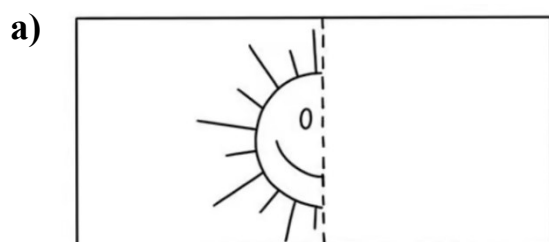
vi) The number having 3 zeros as digits and very close to 999 is _____.

- a) 102 b) 100 c) 1000 d) 500

V. Do as directed:

(2 × 5 = 10)

i) Complete the whole picture by drawing the other half.



ii) Write in figures.

a) Three hundred sixty two = _____

b) Four hundred forty four = _____

iii) There are 30 kajukatlis in a box. Renu wants to distribute all kajukatlis equally among 5 people. How many kajukatlis will each get?

iv) Write any four objects that are more than a metre long.

A. 1. _____

2. _____

3. _____

4. _____

v) State whether following statements are 'True' or 'False'.

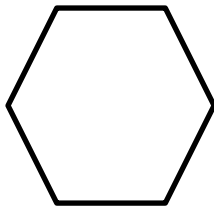
i) $54 \div 6 = 9$ _____

ii) A pencil is more than 1 metre. _____

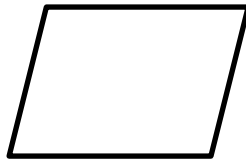
VI. Do as directed:

(4 × 1 = 4)


Draw lines and colour the shapes given below to show the fraction as instructed.




2 quarters




1 quarter




3 quarters



4 quarters



3 quarters



1 quarter

Section – C – ABILITY TO COMPUTE (20 Marks)

VII. Choose the correct answer and fill in the blanks.

(1 × 4 = 4)

i) 175 and 825 make _____.

(1000, 100)

ii) $519 - 40 =$ _____.

(477, 479)

iii) 481 and _____ makes 500.

(15, 19)



iv) The number between 345 and 347 is _____.

(346, 330)

VIII. Do as directed:

(2 × 6 = 12)

i) Write any two things that we can buy using the note 10 rupee and 50 rupees.



ii) The number is 269.

a) Add 100 to 269

b) Add 10 to 269

c) Add 1 to 269

iii) Write two names of objects that are 1 kilogram.

iv) Look at the given balance and fill in the blank with correct answer:



a) Each daal packet weighs a _____.

(half kilogram / kilogram)

b) Each tea packet weighs a _____.


(half kilogram / quarter kilogram)

v) Use the following notes and coins to buy the things given below. Find at least one way of giving the money. You may use the notes and coins more than once.



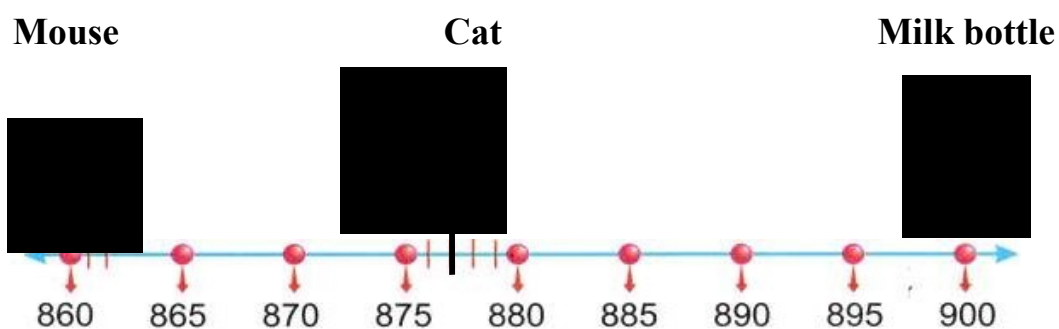
a)

b)



Rs. 30

vi) Help cat to reach the mouse and milk bottle using number line.



a) To reach the mouse: _____ - _____ steps = 860

b) To reach the milk bottle: _____ + _____ steps = 900

IX. Do as directed:

(4 × 1 = 4)

Sita, Geeta and Rita drink milk in these vessels.

i) Observe these cups and answer the questions.

Sita's cup



Geeta's glass



Rita's jug



a. Who drank the most milk? _____

b. Who drank the least milk? _____

ii) Fill in the blank's with MORE or LESS.

a. Sita's cup holds _____ milk than Geeta's glass.

b. Rita's jug holds _____ milk than Geeta's glass.

Section – D – PROBLEM SOLVING (20 Marks)

X. Fill in the blanks by choosing the correct answer:

(1 × 4 = 4)

i) If we compare lunch box and pencil box, lunch box is _____ than pencil box.

(lighter, heavier)

ii) Add 2: 334, 336, _____, 340, 342.

(339, 338)

iii) Month that has less than 30 days is _____.

(February, March)

iv) Number of days in a year is _____.

(365, 465)

XI. Do as directed:

(2 × 6 = 12)

i) Renu wants to make 6 rakhis. For each rakhi she needs 1 flower, 2 threads and 4 beads. Find out how many flowers, threads and beads does she need for making 6 rakhis?

A. No. of flowers = _____

No. of threads = _____

No. of beads = _____

ii) The shopkeeper packs 10 laddoos in 1 box. If Gopi buy 7 such boxes, how many laddoos did Gopi buy?

iii) Find the following for the number 468.

Neighbouring hundreds = _____ and _____

Neighbouring fifties = _____ and _____

Neighbouring tens = _____ and _____

iv) Write the time that each clock showing:





v) Write the names of 12 months in a year.

vi) Use 6 beads of one colour and 2 beads of another colour to make symmetrical mala.

XII. Solve the following:

(4 × 1 = 4)

Look at the Birth Certificate of Bincy and answer the following question:

Form Number 5
Government of Kerala

 **BIRTH CERTIFICATE**

This is to certify that this information is taken from the original record of birth which is in the register for the year 2015 of Kottayam Panchayat.

Name: Bincy Thomas Jacob

Sex: female

Date of Birth: 02/05/2015 (Second May Two Thousand Fifteen)

Place of Birth: Kadampuzha Hospital

Name of Father: Jacob Tharakan

Name of Mother: Lara Thomas

Date of Registration: 02/05/2015

Registration Number: 815/15

Date 18. 05. 2015

Signature Authority

a) 2/5/2015 shows that Bincy was born on

- 5 is (April/ May/ June/ July) in the year 2015.

b) How old will Bincy be on 2 May 2025? _____

c) How old will she be in 2030? _____

d) Eight Birthday of Bincy was on _____.

*** **



परमाणु ऊर्जा शिक्षण संस्था
Atomic Energy Education Society

वार्षिक परीक्षा /Annual Examination Practice paper-2

कक्षा/Class : III

अवधि / Duration : 3 Hours

विषय/Subject : Mathematics अधिकतम अंक/Maximum Marks : 80

विद्यार्थी द्वारा भरा जाए / To be filled by the Student

अद्वितीय परीक्षा क्रमांक/Unique Examination No: _____

कक्षा / अनुभाग Class /Sec.: _____ दिनांक / Date: _____

परीक्षा का दिन /Day of Examination: _____

विद्यालय का नाम/Name of the School: _____

हस्ताक्षर निरीक्षक (दिनांक सहित) /Invigilator's Sign.(With date): _____

अध्यापकों द्वारा भरा जाए / To be filled by the Teachers

प्राप्तांक / Marks Obtained

पूर्णांक /Total Marks

हस्ताक्षर परीक्षक (दिनांक सहित) / Examiner's Sign.(With date): _____

हस्ताक्षर जाँचकर्ता (दिनांक सहित) / Cross Checker's Sign.(With date): _____

हस्ताक्षर परीक्षा प्रभारी (दिनांक सहित) / Exam I/C Sign.(With date): _____

सामान्यनिर्देश /General Instructions:

- 1. The question comprises of four sections A,B,C & D.**
- 2. Each section carries 20 marks.**
- 3. All the questions are compulsory.**

Section A - KNOWLEDGE (20 MARKS)

I. Choose the correct answer and fill in the blanks. (6x1=6)

- a) 1 metre = _____ cm. (50 100 10)
- b) $3 + 3 + 3 + 3 =$ _____. (4×3 3×4 $4 + 3$)
- c) A year has _____ days. (30 12 365)
- d) 7 hundreds + 3 tens + 2 ones = _____. (237 732 372)
- e) A _____ clock shows time using digits. (analog sand digital)
- f) $27 \div 3 =$ _____. (9 6 7)

II. Do as directed. (5x2=10)

- a) A box has 7 pencils. How many pencils are there in 4 such boxes?

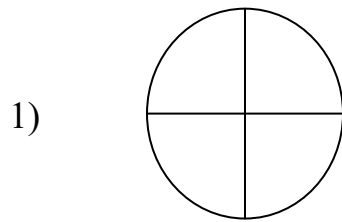
b) Match the following.

- | | | |
|-----------------------|---------------------------|--------|
| 1) Stitching a shirt | – Measured in metres | () |
| 2) Height of a door | – Measured in centimetres | () |
| 3) Lunch break | – Takes hours | () |
| 4) Length of a pencil | – Takes minutes | () |

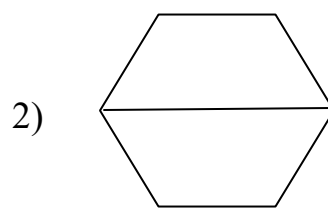
c) Write in words.

- 1) 407 = _____
- 2) 736 = _____

d) Colour the shapes to show the given fractions.



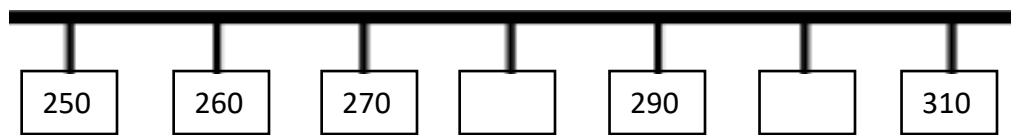
Quarter



Half

e) Complete the following numbers and locate them using the number line.

263 , 287



III. John, Sam and Mani drink milk in these containers.

a) Observe these containers and answer the following. (1x4=4)

John's cup



Sam's mug



Mani's jug



1) Who drank the most milk? _____

2) Who drank the least milk? _____

b) Fill in the blanks with **more** or **less**.

1) Sam's mug holds _____ milk than Mani's jug.

2) Mani's mug holds _____ milk than John's cup.

Section B - UNDERSTANDING (20 Marks)

I. Choose the correct answer and fill in the blanks.

(6x1=6)

a) Repeated subtraction is called _____.

(addition division multiplication)

b) _____ is a special number. (345 421 798)

c) It takes _____ to change from summer to winter.

(days months hours)

d) Half kilogram = _____ grams.

(500 100 1000)

e) $24 \div$ _____ = 6. (8 3 4)

f) 11, 22, 33 have _____ digits.(triplet one twin)

II. Do as directed.

(5x2=10)

a) Fill in the blanks with heavier / lighter.

1) A pencil is _____ than a book.

2) A watermelon is _____ than a mango.

b) Write two activities that takes minutes to complete.

c) An auto-rickshaw has 3 wheels. How many wheels are there in

1) 7 auto-rickshaws? _____

2) 12 auto-rickshaws? _____

d) Draw a rakhi longer than the rakhi given below.



e) **Solve using box diagram.**

Rita had ₹368 in her purse . She bought a bag for ₹125.How much money is left in her purse?

III. Observe the given calendar and answer the following questions. (1x4=4)

January 2024

Sun	Mon	Tue	Wed	Thu	Fri	Sat
	1	2	3	4	5	6
7	8	9	10	11	12	13
14	15	16	17	18	19	20
21	22	23	24	25	26	27
28	29	30	31			

Observe the January month and complete the following.

- a) Write the number of days in the month. _____
- b) Number of Mondays _____
- c) The day on 25th January is _____.
- d) 4 days after 10th January is _____.

Section C - ABILITY TO COMPUTE (20 Marks)

I. Write true or false.

(4x1=4)

- a) 8 times 3 is 28. ()
- b) 7 less than 257 is 250. ()
- c) Four quarters make a whole. ()

d) The length of a sari is measured in centimetres. ()

II. Do as directed.

(6x2=12)

a) Complete the number pattern.

1) 3 , 6 , 9, _____ , _____.

2) 5, 9, 13, _____ , _____.

b) There are 18 flowers. Put them equally in 3 boxes. How many flowers are there in each box ?



There are _____ flowers in each box.

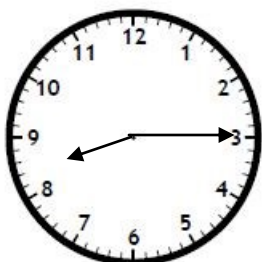
c) Write the appropriate numbers between which the number 568 lie.

Neighbouring hundreds : _____ and _____.

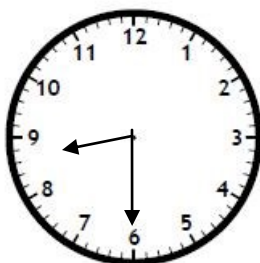
Neighbouring fifties : _____ and _____.

d) Write the number of minutes passed .

Beginning time

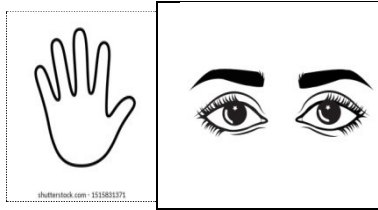


End time



Time taken

e) 1) Write the number for the given cards.



Ans: _____.

2) Draw the mirror image of the given figure.



f) Make as many 2 or 3 digit numbers as you can using the digits 3 and 7. You can repeat the digits.

Two digit numbers : _____ , _____

Three digit numbers: _____ , _____

III. Fill in the blanks.

(1x4=4)

a) Two quarters = _____.

b) 57 more than 300 is _____.

c) 5 dogs have _____ legs.

d) $30 \times 6 =$ _____.

Section D – PROBLEM SOLVING ABILITY (20 Marks)

I. Choose the correct answer and fill in the blanks. (6x1=6)

a) 15 more than 25 rupees is _____ rupees.

(30 18 40)

b) $23 \times 0 =$ _____. (32 0 23)

c) Mani has more than half of 8 marbles. He has _____ marbles.

(4 3 5)

d) Quarter past 9 is _____.

(9:15 8:30 8:15)

e)

100

100

10

10

10

10

100


Identify the number. _____ (304 430 340)

f) Add 10 to 268. We get _____. (368 278 628)

II. Do as directed. (5x2=10)

a) Draw the hour hand and minute hand on the clock to show the time.

1)



Half past 4

2)



7 o'clock

b) Make a word problem for 4×8 .

c) Write two ways of making 526.

1) _____

2) _____

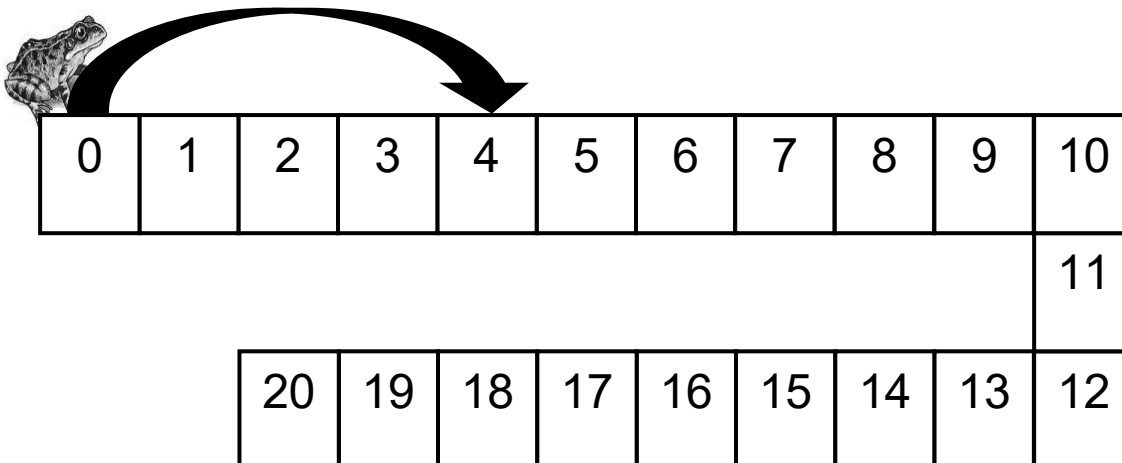
d) 1) Add

$$\begin{array}{r} 2 \quad 4 \quad 7 \\ + \quad 3 \quad 2 \quad 8 \\ \hline \\ \hline \end{array}$$

b) Subtract

$$\begin{array}{r} 6 \quad 3 \quad 5 \\ - \quad 2 \quad 8 \quad 3 \\ \hline \\ \hline \end{array}$$

e) Starting from 0, a frog jumps 4 steps at a time.



a) In how many jumps will the frog reach 12 ?

Ans: _____

b) Which number will the frog reach after four jumps?



Ans: _____

III. Solve the following.

(1x4=4)

a) Use the notes and coins to buy the things given below. You can use it more than once.



Things	Amount	Notes and coins
	₹ 60	
	₹ 27	

b) Answer the following.

1) How many ₹100 notes are equal to 500 note ?

Ans : _____

2) 7 notes of ₹50 notes makes _____ rupees.

|



परमाणु ऊर्जा शिक्षा संस्था

Atomic Energy Education Society

वार्षिक परीक्षा / Annual Examination Practice paper-3

कक्षा/Class : तीसरी / III

अवधि / Duration : 3 घंटे / 3 hours

विषय/Subject : गणित / Mathematics

अधिकतम अंक/Maximum Marks : 80

To be filled by the Student

अद्वितीय परीक्षा क्रमांक / Unique Examination No : _____

कक्षा/अनुभाग Class/Sec.: _____ दिनांक /Date: _____

परीक्षा का दिन/ Day of Examination: _____

विद्यालय का नाम / Name of the school : _____

निरीक्षक के हस्ताक्षर(दिनांक सहित)/Invigilator's Sign (with date) : _____

अध्यापकों द्वारा भरा जाए / To be filled by the Teacher

प्राप्तांक / Marks obtained

पूर्णांक / Total marks

परीक्षक के हस्ताक्षर(दिनांक सहित)/Examiner's Sign(with date) : _____

जांचकर्ता के हस्ताक्षर(दिनांक सहित)/Checker's Sign(with date) : _____

परीक्षा प्रभारी के हस्ताक्षर(दिनांक सहित)/ Exam I/c Sign(with date) : _____

सामान्यनिर्देश:

1. प्रत्येक प्रश्न के सामने अंक अंकित हैं।
2. प्रत्येक प्रश्न को ध्यान से पढ़ें और उत्तर साफ-सुथरा लिखें।
3. सुनिश्चित करें कि प्रत्येक अनुभाग के प्रश्नों का उत्तर दिया गया है।
4. परीक्षा पूरी होने पर छात्र निरीक्षक को उत्तर पुस्तिका सौंपेंगे।
5. छात्र को यह सुनिश्चित करना चाहिए कि उत्तर पुस्तिका क्षतिग्रस्त या मुड़ी हुई न हो।

General Instructions:

1. Marks are indicated against each question.
2. Read each question carefully and write the answer neatly.
3. Ensure that questions from each section are answered.
4. On completion of the exam, the student must hand over the answer sheet to the invigilator.
5. The student should ensure that the answer sheet is not damaged or folded.

SECTION-A
KNOWLEDGE (20 MARKS)

1. Choose the correct answer and fill in the blanks.

(6X1=6)

i) 5 balls are _____ of 10 balls.

- a) half b) double c) triple d) quarter

ii) A tea cup contains _____ of tea.

- a) more than 1 L b) less than $\frac{1}{2}$ L c) more than $\frac{1}{2}$ L d) more than 2 L

iii) A week has _____ days.

- a) 30 b) 20 c) 7 d) 365

iv) Length of a pencil is measured in _____.

- a) metres b) kilometres c) feet d) centimetres

v) An hour is equals to _____ minutes.

- a) 60 b) 30 c) 45 d) 15

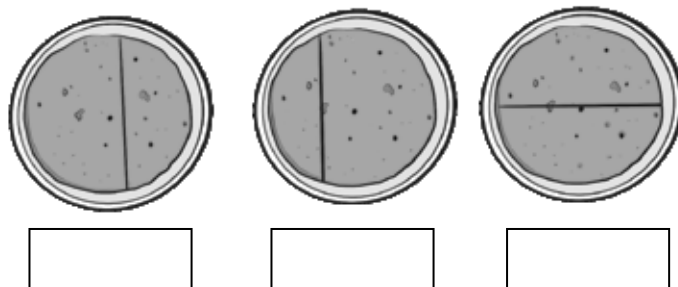
vi) Six times five is _____.

- a) 40 b) 75 c) 30 d) 25

2) Do as directed.

(5X2=10)

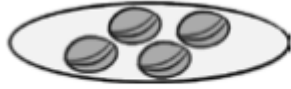
i) Tick (✓) the paratha that has been cut equally



ii) Guess who am I ?

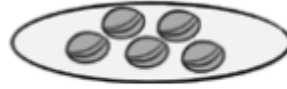
I have less than double of 3 marbles. I have more than half of 8 marbles.

a)



4 Marbles

b)



5 Marbles

c)



6 Marbles

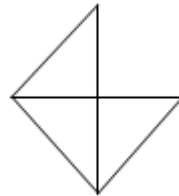

_____ Marbles.

iii) A spider has 8 legs .

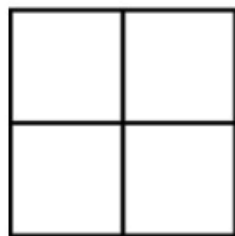
8 spiders will have _____ legs.

10 spiders will have _____ legs.

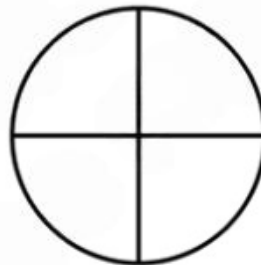
iv) Draw the remaining quarters to complete the whole.



v) Colour the shapes below to show the fractions as instructed.



1 quarter

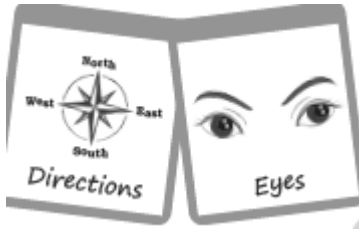


3 quarters

3) Answer the following.


(1X4=4)

Write the numbers, for the following cards.









SECTION-B

UNDERSTANDING (20MARKS)

4. Choose the correct answer and fill in the blanks.

(6x1=6)

(i) Which of the following shows 3 groups of 4 objects? _____

(a) $12 + 4$ (b) 4×3 (c) 3×3 (d) $4 + 3$

(ii) When a whole is shared equally among _____ people, each share is called a quarter.

(a) 1 (b) 2 (c) 3 (d) 4

(iii) A hand span is used to measure _____ distance.

(a) long (b) short

(iv)) Fill in the box with correct symbol.

15 20

(a) $<$ (b) $=$ (c) $>$

(v) Write in words.

245: _____

a) Two hundred and fifty-four

b) One hundred and seventy two

c) Two hundred and forty-five

d) Three hundred

(vi) _____ is the example of one object whose length is less than one metre.

a) door

b) almirah

c) book

d) bus

5) Do as directed.

(5X2=10)

- (i) Draw the other half of the moustache which is as long as the half of the moustache on the face shown in the picture.



- (ii) Tommy started her breakfast at 7 o'clock in the morning.

She finished her breakfast at 07:15 in the morning.

(a) 07:00



(b) 07:15



She took _____ minutes to eat her breakfast.

- (iii) Look at the pattern and write the missing numbers.

88, 84, _____, _____, _____, _____, 64

- (iv) Complete the table by doing as directed.

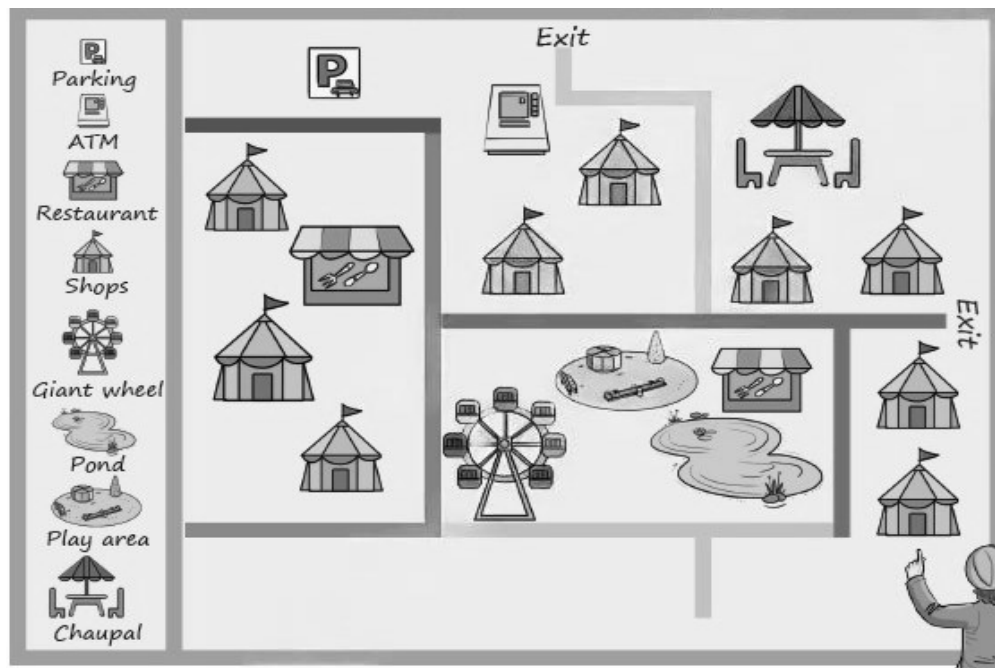
Weight	Double of the weight	Half of the weight
4 kg		
6 kg		

- (v) Write the number of minutes taken for the following activities.


Activity	Time taken
School period minutes
Lunch break minutes

(6) Look at the map given below and answer the following questions.

(1X4=4)



Help Soni and Avi to read the map and find the following:

i) Which place does the  sign show?

ii) Circle the picture in the map that shows the play area?

iii) Which place does the  sign show?

iv) How many exit routes are there in the fair?

SECTION:C

ABILITY TO COMPUTE (20 MARKS)

7. Choose the correct answer and fill in the blanks.

(4x1=4)

a) X 7 = 56. (8 or 6)

b) _____ is the 3 digit greatest number. (100 or 999)

c) $456 + 923 =$ _____. (1379/1380)

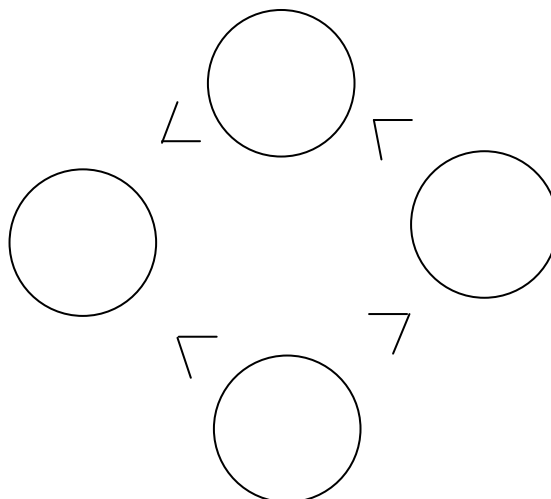
d) 16 equally divided by 2 is _____. (7 or 8)

8. Do as directed:

(6X2=12)

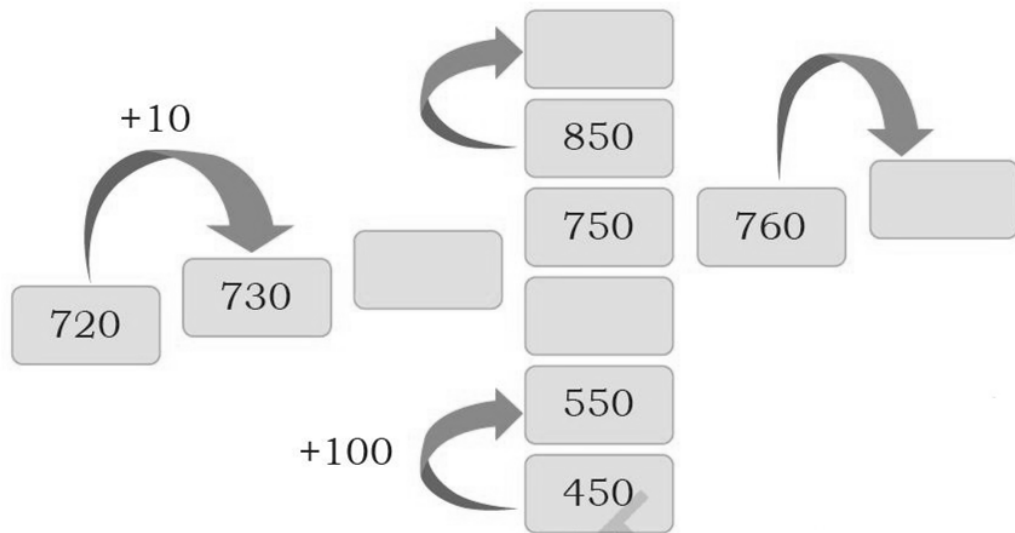
(i) Sona has Rs 125 and her sister gives her Rs 254. How much money does Sona have now ?

(ii) Fill the numbers 256, 78, 177, 805 in the empty circles such that they meet the conditions.



(iii) Skip and solve:

Sima and Rima are resting. Subham asks them to complete the number patterns. Let us help them fill in the empty boxes.

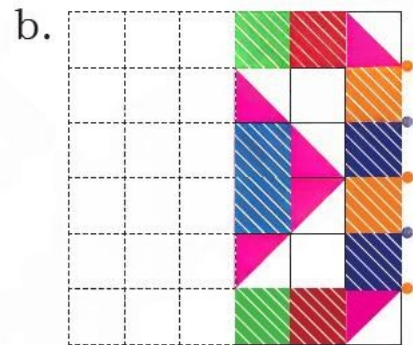
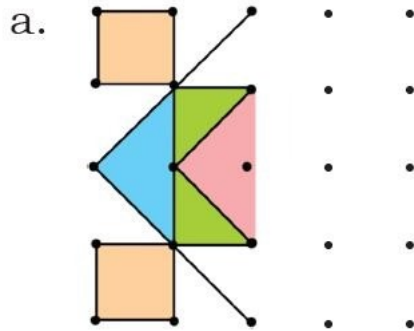


(iv) Robin's uncle saved Rs 250 in the first month, Rs 125 in the second month and Rs 350 in the third month. How much has he saved in these three months?

(v) Estimate the answers to the nearest hundred.

Number Sentence	Nearest Hundred
$458+123$	
$678+256$	



(vi) Draw and complete the symmetrical rangolis given below.



9. Use the following notes and coins to buy the things given below.

Find at least two ways of giving the money. You may use the notes and coins more than once.

(1X4=4)



SECTION:D

PROBLEM SOLVING ABILITY (20MARKS)

10. Fill in the blanks.

(4x1=4)

(i) If you have 1 litre of juice and you drank 500 millilitres, how much juice is left? _____ ml

(ii) _____ is the longest measurement?

a) 99 cm

b) 1 m

c) 001cm

d) 50 cm

(iii) 

$5 + 5 + 5 + 5 + 5 + 5 + 5 + 5 + 5 + 5 = 10 \times 5 =$ _____ spokes.

(iv) Smallest 3 digit number can be made using 3,1 & 9 is _____ .

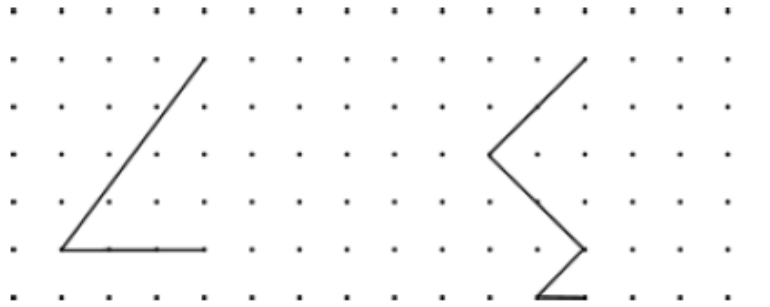
11. Do as directed.

(6X2=12)

i) 30 cookies are to be distributed among 5 children equally. How many cookies will each child get?

ii) Mary has 63 sea shells. She gave 7 sea shells to each of her 5 friends.
How many does she have left?

iii) Complete the whole picture by drawing the other half.



iv) Kishan has 456 saplings in his farm. He distributed 363 saplings. How many saplings are left with him?

v) Subham has Rs 356 and his sister gives him Rs 450. How much money does Subham have now?

vi) 6 eggs can be packed in one tray. How many trays will Kunal needs to pack 57 eggs ? How many eggs will be left unpacked?

12. Shown below is the month of February from the calendar of the year 2025.

Look at this carefully and answer the questions that follow.

(1X4=4)

February 2025						
Sunday	Monday	Tuesday	Wednesday	Thursday	Friday	Saturday
						1
2	3	4	5	6	7	8
9	10	11	12	13	14	15
16	17	18	19	20	21	22
23	24	25	26	27	28	

i) How many Sundays are there in February 2025 ?

ii) What date is the second Saturday of February 2025 ?

iii) On which day does this month start?

iv) How many days are there in this month?



परमाणु ऊर्जा शिक्षण संस्था
Atomic Energy Education Society
वार्षिक परीक्षा /Annual Examination Practice paper-4

कक्षा/Class : III

अवधि / Duration :3 hours

विषय/Subject :Mathematics

अधिकतम अंक/Maximum Marks: 80

विद्यार्थी द्वारा भरा जाए / To be filled by the Student

अद्वितीय परीक्षा क्रमांक/ Unique Examination No: _____

कक्षा / अनुभाग Class /Sec.:_____ दिनांक / Date: _____

परीक्षा का दिन / Day of Examination: _____

विद्यालय का नाम / Name of the School: _____

हस्ताक्षर निरीक्षक (दिनांक सहित) / Invigilator's Sign. (With date): _____

अध्यापकों द्वारा भरा जाए / To be filled by the Teachers

प्राप्तांक / Marks Obtained

पूर्णांक /Total Marks

हस्ताक्षर परीक्षक (दिनांक सहित)/Examiner's Sign. (With date): _____

हस्ताक्षर जाँचकर्ता(दिनांकसहित) /Cross Checker's Sign.(With date): _____

हस्ताक्षर परीक्षा प्रभारी (दिनांक सहित) / Exam I/C Sign. (With date): _____

सामान्यनिर्देश /General Instructions:

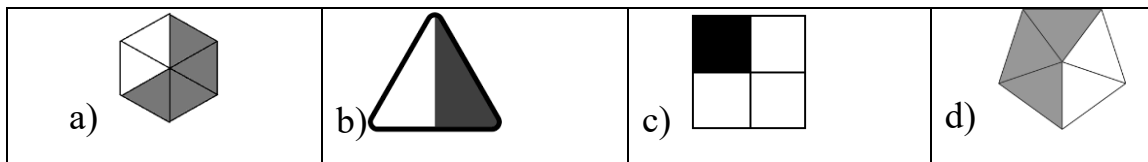
1. इस प्रश्न पत्र में चार खंड ए, बी, सी और डी हैं। प्रत्येक खंड अंकों का है 20/This question paper contains four sections A, B, C and D. Each section carries 20 marks.
2. सभी प्रश्न अनिवार्य हैं /All questions are compulsory.

Section -A Knowledge (20 Marks)

A1. Tick (✓) the correct options.

(6X1=6)

- 1) Which of the following picture represents half of the whole.



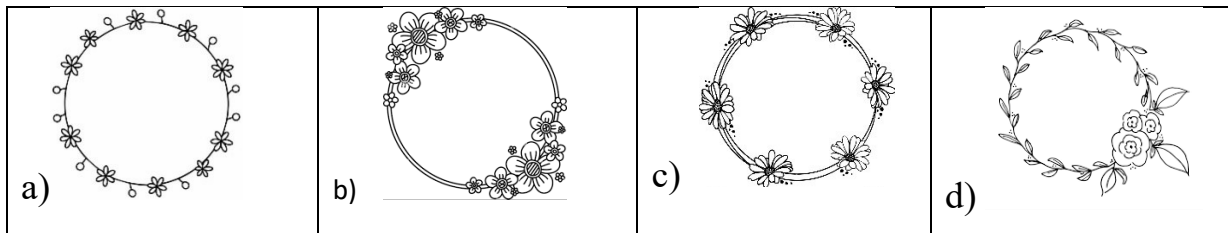
2) How many minutes are there in 1 hour?

- a) 100 b) 50 c) 60 d) 30

3) Which of the following are the neighbouring fifties of 165?

- a) 150 and 200 b) 150 and 250 c) 100 and 200 d) 50 and 60

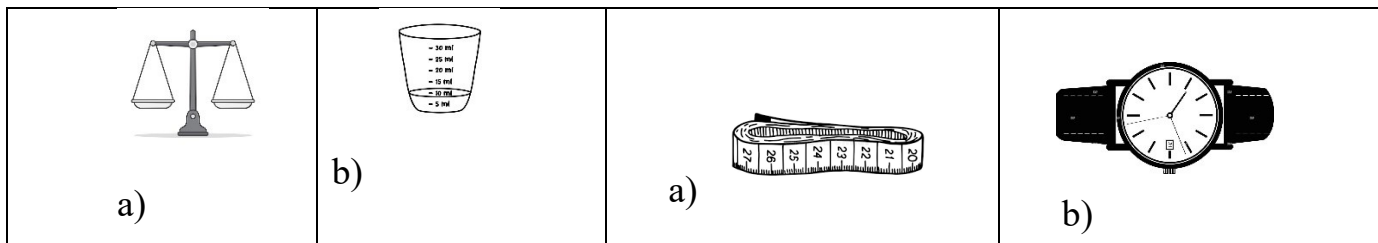
4) Which of the following Mala is not symmetric?



5) Which unit is commonly used to measure length?

- a) Kilogram b) Litre c) Metre c) Second

6) Which of the following tools will you use to measure the weight of an apple?



A2. Do as directed.

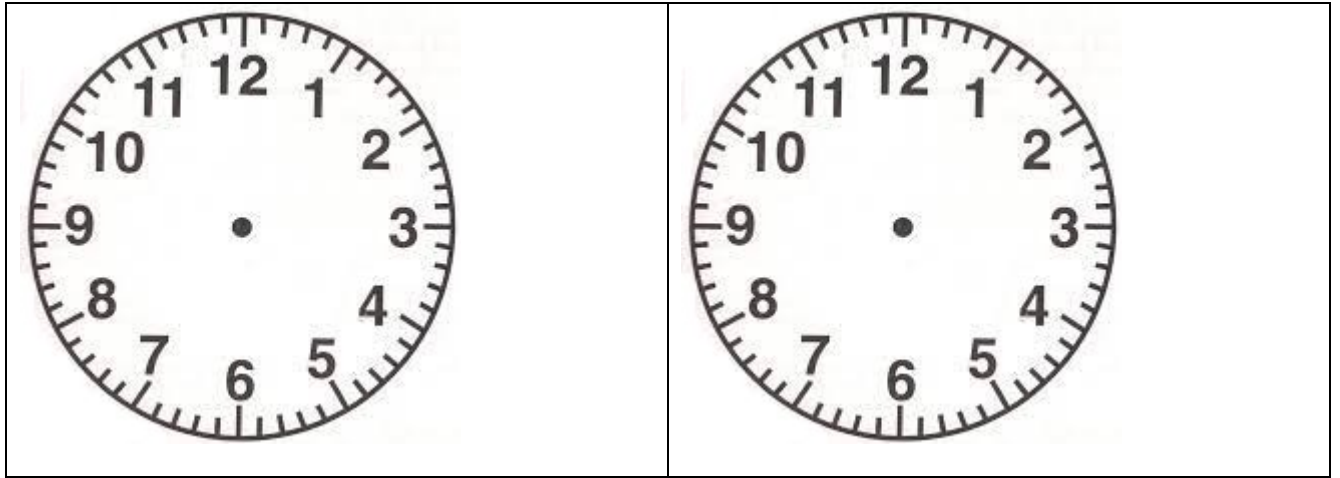
(5X2=10)

1) Colour the beads in the string using red and green colours to make a symmetric Mala.



2) Draw the hour hands and minute hands on the clock to show

a) 8: 15 o'clock	Half past 7
------------------	-------------



3) Arrange the objects in the order of lightest to heaviest.

School bag pencil box lunch bag a pencil

a) _____ c) _____

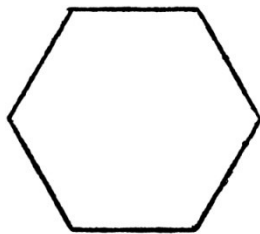
b) _____ d) _____

4) Write the smallest and the biggest three-digit numbers using 9, 0 and 1. Digits should not be repeated.

The smallest number = _____

The biggest number = _____

5) Divide the given shape into 4 quarters and colour any 3 quarters.



A3. Radha is a daughter of Mr. **Radheshyam** and Mrs. **Radhika**.

She born on **05 September 2024** in **KamlapurHostpital** at Sitapur panchayat,
Uttar Pradesh **India**.

Complete her Birth Certificate.

(4)

Form Number – 6

Government of _____

BIRTH CERTIFICATE

This is certified that the information was taken from original record of birth which is in register for the year 2024 and 2025 in Sitapur Panchayat.

Name : Radha

Sex : _____ (Male / Female)

Date of Birth : _____

Place of Birth : _____

Name of Father : _____

Name of Mother : _____

Date of Making Certificate : _____

Age on the date of making the Certificate : _____

Date 05/12/2024

Signature Authority

Section – B Understanding (20 Marks)

B1. Fill in the blanks with correct option.

(6X1=6)

1) Two cows has _____ legs in all .





- a) 2 b) 4 c) 8 d) 6

2) A number which has zero once and zero tens is _____

- a) 500 b) 105 c) 510 d) 50

3) Which of the following can hold more than one litre of water.

- a) A cup b) a spoon c) a bucket d) a glass
- 4) Which of the following activity will take more than 1 month?
- a) Sleeping c) changing summer to winter
- b) Blinking eyes d) none of these
- 5) Which of the following item is the cheapest in prize?

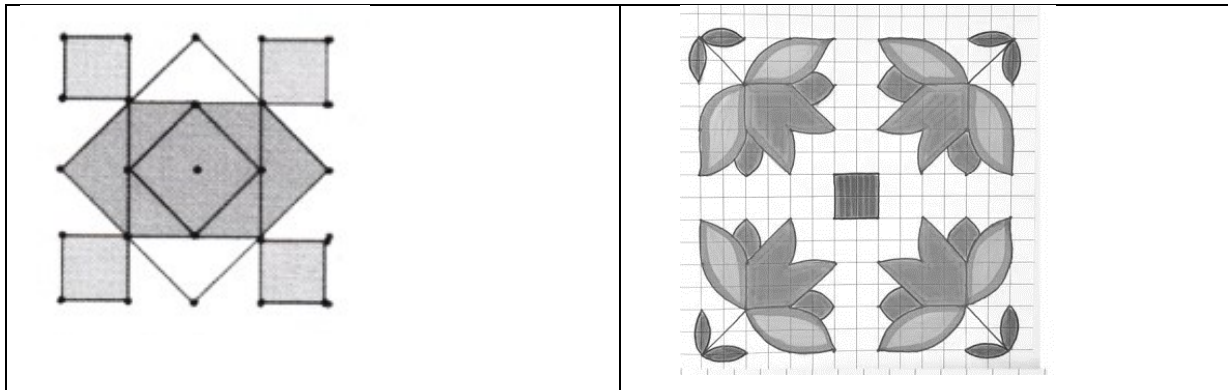
<p>a)</p> 	<p>c)</p> 
<p>b)</p> 	<p>d)</p> 

- 6) How many hours do you spend in your school normally?
- a) 6 b) 8 c) 10 d) 12

B2. Do as directed.

(5X2=10)

- 1) Draw the line in the given Rangoli that divide them into identical halves.



- 2) Add the numbers by using number line .



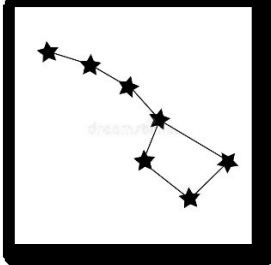

$$438 + 53 = \underline{\hspace{2cm}}$$

- 3) Draw a decorating string longer than



--

4) Make the numbers by looking at the cards

<div style="display: flex; justify-content: space-around; align-items: center;"> <div style="text-align: center;">  <p>Palm</p> </div> <div style="text-align: center;">  <p>Octopus</p> </div> </div>		<div style="display: flex; justify-content: space-around; align-items: center;"> <div style="text-align: center;">  <p>Constellation</p> </div> <div style="text-align: center;">  <p>Moon</p> </div> </div>	
Number -		Number -	

5) Look at gopal's skip jump and fill in the blanks.



Gopal is doing skip jumping of _____ Septs.

After 12 he will jump on _____ number.(Draw the jump)

B3. Write more sentences for the given number. (one has been done for you) (4)

705 = 700 +5 or 5 more than 700

705 = _____

705 = _____

705 = _____

705 = _____

Secti

on -C Ability to compute (20 Marks)

C1. Fill in the blanks.

(4X1=4)

1) $4+4+4+4+4 =$ _____ times 4

2) 2 century = _____

3) 40 less than 190 is _____

4) Half of 600 = _____

C2. Solve the following questions.

(6X2=12)

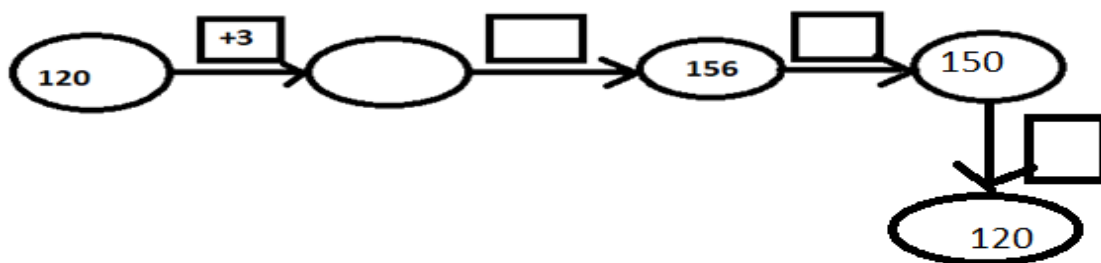
1) Use the grid below to solve the following question. Mark and colour your answer in the grid.

591	592	593	594	595	596	597	598	599	600
581	582	583	584	585	586	587	588	589	590
571	572	573	574	575	576	577	578	579	580
561	562	563	564	665	566	567	568	569	570
551	552	553	554	555	556	557	558	559	560

$556 + 14 =$ _____

$568 + 31 =$ _____

2) Fill in the box with appropriate numbers.



3) Count and write the values of note and coins.

	Total Amount
---	--------------





	  	Rs. _____
---	--	-----------

4) Multiply the numbers .

a) 58×6

b) 79×4

5) Write the number of minutes passed by looking movement of minutes and hour hands.




Beginning Time	End Time	Time Taken
		
		

6) Solve the following

a) $32 \div 4$

b) $45 \div 5$

C3. Read the question carefully and answer the question

- a) _____ cups can be filled with a jug of water?
- b) _____glasses of water will be needed to fill a pot?
- c) How many pots can be filled by 27 jugs of water? _____
- d) How many jugs can be filled with 50 glasses of water? _____

Section -D Problem Solving Ability (20 Marks)

D1. Fill in the blanks.

(4X1=4)

- 1) Length of your handspan is _____ than a quarter metre.
- 2) The double of 20 birds = _____ birds.
- 3) Complete the pattern 3, 6, 9, 12, _____
- 4) The glass holds _____ than 1 litre of water.

D2. Solve the word problems.

- 1) Reena has less than double of 3 marbles but it is more than half of 8 marbles.

How many marbles does she have?

Double of 3 marbles = _____

Half of 8 marbles = _____

Number of marbles exactly Reena has = _____

- 2) Malti has 63 sea shells .She gives sea shells to her 7 friends equally.

How many shells does each friend get?

- 3) An Idli vessel contains 6 idli plates. In each plate we can make 4 idlis .

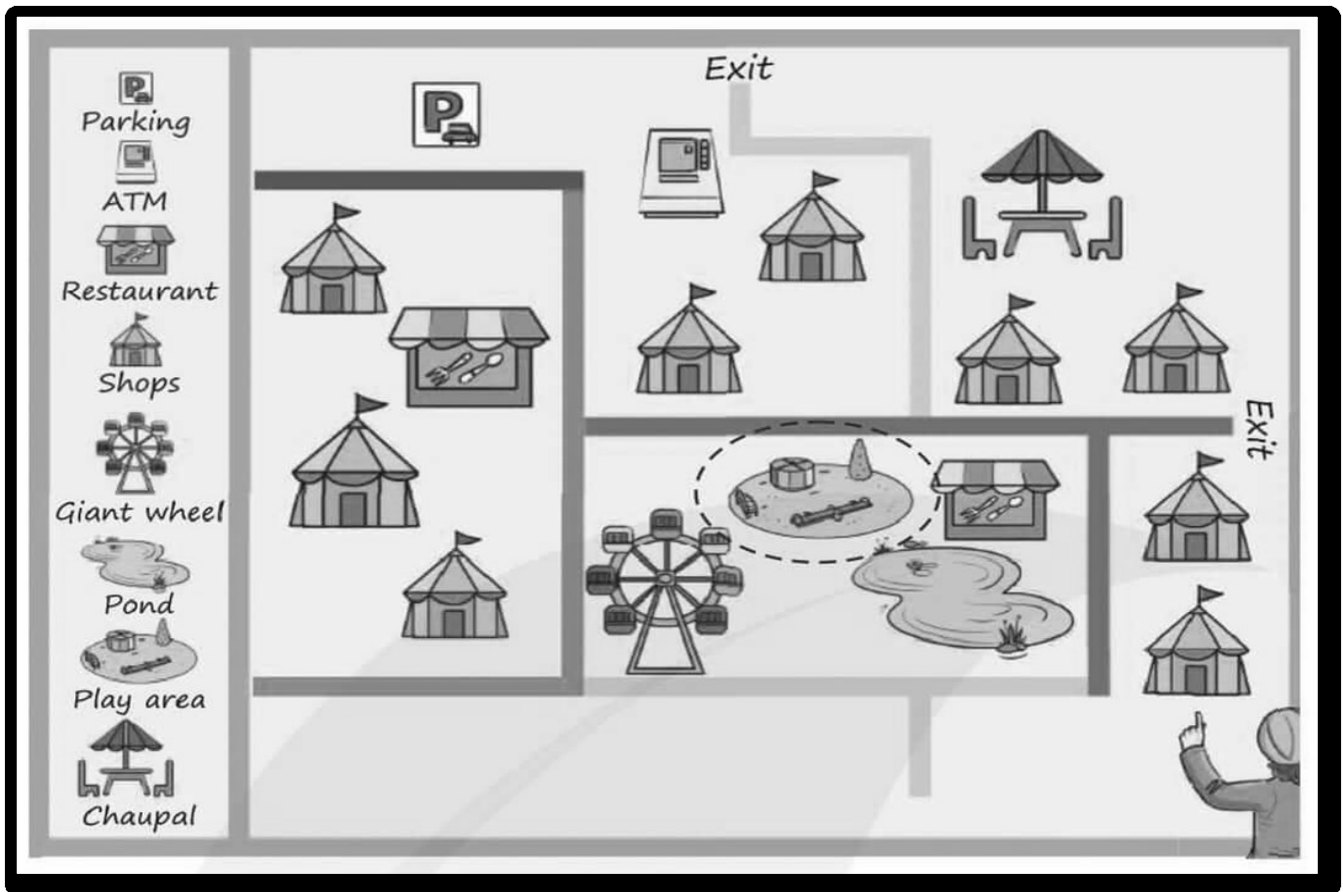
How many idlis can be cooked in one go?

- 4) Peckey the hen can see 48 legs of ants in the ant's raw. How many ants were there?

5) Mohan has 270 sapling of herbs and his friend has 36 sapling of herbs .
How many more sapling does Mohan has than his friend?

6) Peter uncle saves Rs 250 in the first month , Rs 125 in the second month
and Rs 350 in third month. How much has he saves in these months?

D3. Here is the picture of a fair. Different symbollls are used to show the different
area. Meaning of the symbols are given. Look at the picture and answer the
questins.



- How many exit routes are there in this fair? _____
- Where is ATM located? _____
- Number of shops in the fair is _____
- Number of restaurant - _____



परमाणु ऊर्जा शिक्षण संस्था
Atomic Energy Education Society

वार्षिक परीक्षा /Annual Examination Practice paper-1

कक्षा/Class :III

अवधि / Duration : 3 Hours

विषय/Subject : TWAU

अधिकतम अंक/Maximum Marks : 80

विद्यार्थी द्वारा भरा जाए / To be filled by the Student

अद्वितीय परीक्षा क्रमांक/ Unique Examination No: _____

कक्षा / अनुभाग Class /Sec.: _____ दिनांक / Date: _____

परीक्षा का दिन / Day of Examination: _____

विद्यालय का नाम/ Name of the School: _____

हस्ताक्षर निरीक्षक (दिनांक सहित) / Invigilator's Sign.(With date): _____

अध्यापकों द्वारा भरा जाए / To be filled by the Teachers

प्राप्तांक / Marks Obtained

पूर्णांक / Total Marks

हस्ताक्षर परीक्षक (दिनांक सहित) / Examiner's Sign.(With date): _____

हस्ताक्षर जाँचकर्ता (दिनांक सहित) / Cross Checker's Sign.(With date): _____

हस्ताक्षर परीक्षा प्रभारी (दिनांक सहित) /Exam I/C Sign.(With date): _____

सामान्यनिर्देश /General Instructions: This paper consists of the following sections:

Section-A (30Marks), Section-B (25 Marks) and Section-C (25 Marks). All questions are compulsory.

Section-A: Observation and Reporting (30 Marks)

I) Do as directed.

1) Circle the odd one. (1X4=4)

- | | | | |
|------------|--------|----------|------------|
| a) Reduce | Reuse | Recycle | Buy more |
| b) Spinach | Sapota | Apple | Mango |
| c) Carrot | Radish | Beetroot | Orange |
| d) Onion | Ginger | Potatoes | Dry fruits |

2) Fill in the blanks choosing the correct option. (1X5=5)

- a) We can use twigs from a _____ tree to clean our teeth. (neem/rose)
- b) Do not interact with _____ unless you are with your parents. (strangers/brother)
- c) Chhappan bhog contains _____ varieties of food items. (56/2)
- d) We use some _____ for storing water at home. (vessels/clouds)
- e) Water comes down to earth as _____. (river/rain)

3) Write 'True' or 'False'. (1X5=5)

- a) The modern idea of brushing teeth came from the Indian hygiene tradition of *datun* using twigs of certain plants. ()
- b) Birds use their beaks to clean their feathers. ()
- c) Monkeys cannot keep their bodies free from insects. ()
- d) The water in our wells comes from the underground water. ()
- e) We cannot live more than 3 days without drinking water. ()

4) Tick (✓) the correct answer. (1)

You might have heard about Harpreet's grandmother in lesson 'Staying Healthy and Happy'. Which game does she love to play with Harpreet?

- a) Wrestling () b) Cricket () c) Chess ()

II) Write short answer.

1) Why is water a precious gift? (2)

Ans. _____

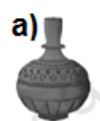
2) Write 2 names of food items that include both plant and animal based ingredients. (2)

Ans i) _____ ii) _____

3) Which of the following places is considered a safe/an unsafe area to play? Tick (✓) the answer. (2)



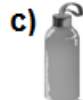
4) Match the containers. (One has been done for you.) (2)



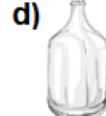
Clay
pot



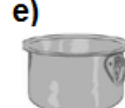
Clay
surahi



Glass
bottle



Aluminium
pot



Plastic
bottle


5) Group the following objects according to the materials that they are made of – door hinges, windowpanes, nails, light bulb. (2)


Name of the material	Objects made of this material
Metal	
Glass	


III) Do as directed. (5)


1) Arrange the following process in the correct order by writing the sentences in the boxes.


- * Keep some stones in it for birds to perch.
- * Take a shallow and wide container.
- * Now, the birdbath is ready.
- * Add fresh water in it.
- * Birds are drinking water from the birdbath.











Section-B: Identification and Classification (25 Marks)

I) Do as directed.


1) Match the following.

(3)


a) Pound the clay well



b) Shape the clay by spinning the stone wheel



c) Move the pot into a kiln



2) Circle the odd one.

(1X4=4)

- | | | | |
|-----------|--------|---------|--------|
| a) Hinges | Nails | Latches | Table |
| b) Chair | Iron | Gold | Silver |
| c) Salads | Fruits | Sweets | Glass |
| d) Dal | Roti | Paneer | Winter |

3) Write 'True' or 'False'.

(1X2=2)

a) Plants and animals are natural things. ()

b) Clothes and shoes are natural things. ()

4) Tick (✓) the correct answer.

(1)

You might have read the story of Shirin in lesson 'Food We Eat'. In which event did she win a medal for her school?

- a) running event () b) painting competition () c) fashion show ()

II) Write short answer.

1) Classify the following items available in the summer and in the winter. (2)

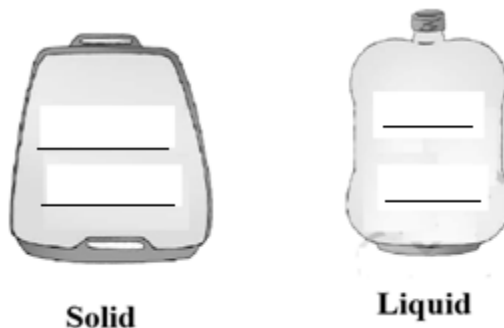
[ice-cream, mangoes, soups, hot drinks]

Summer	Winter

2) Classify the following objects into 'see through clearly' and 'cannot see through at all'. (cloth, glass, notebook, specs) (2)

See through clearly	Cannot see through at all

3) Group the items into solid and liquid- ink, a stone, a spoon and water. (2)

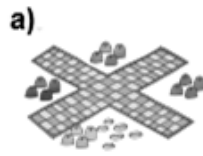


4) Write 4 activities you can think of for which we need water. (2)

Ans. _____

5) Name the games.

(2)





III) Do as directed.

(5)

1) Find the names of the games (any 5) hidden in the given maze. One has been done for you. (Hint- search from left to right and vice versa, from top to down and vice versa and from one diagonal to another diagonal)

B	I	U	A	F	Y	L	S	T	B	S	L
J	A	T	U	E	R	G	X	E	A	C	L
K	A	D	K	E	G	N	M	N	S	I	A
V	H	C	M	Z	X	O	I	N	K	T	B
S	O	O	Y	I	C	I	C	I	E	S	Y
H	G	J	K	L	N	R	D	S	T	A	E
W	R	N	Q	H	I	T	V	I	B	N	L
C	V	G	N	C	O	F	O	Z	A	M	L
Y	W	Z	K	X	V	P	A	N	L	Y	O
H	V	E	D	S	I	H	W	Q	L	G	V
D	T	R	T	L	L	A	B	T	O	O	F
L	X	K	A	B	A	D	D	I	P	H	P

Ans. Kabbadi, 1 _____, 2 _____, 3 _____, 4 _____, 5 _____

Section-C: Discovery of facts (25 Marks)

I) Do as directed.

1) Match the pairs. (3)

- | | |
|----------------|---------------------------------|
| a) Transparent | i) A lamp shade made of paper |
| b) Translucent | ii) A plate |
| c) Opaque | iii) A glass used in spectacles |

2) Write 'True' or 'False'. (1X4=4)

- a) Paper will tear if it gets wet in the rain. ()
- b) Spoon is made of cement. ()
- c) Walls can be made of water. ()
- d) Air is a liquid. ()

3) Name any two for each of the following. (1X2=2)

- a) Drinks i) _____ ii) _____
- b) Sources of water i) _____ ii) _____

4) Tick(✓) the correct answer. (1)

You have learned about Silluk village in the lesson 'Taking Charge of Waste'. In which state is Silluk village situated?


- a) Arunachal Pradesh() b) Telangana() c) Maharashtra()

II) Write short answer.

1) Why do we need to eat healthy food? (2)

Ans. _____

2) Look at the picture and name the things. (bulb, window, black board, door frame) (2)



3) Why do you think mud houses are better for the environment? (2)

Ans. _____

4) Name 2 things that you would put in the green dustbin and 2 things that you would put in the blue dustbin. (2)

Ans. Green dustbin- i) _____ ii) _____

Blue dustbin- i) _____ ii) _____


5) Decorate the given objects with patterns.

(2)

a)



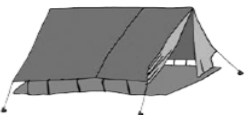



b)



III) Do as directed.

(5)

1) Fill the name of each type of house and complete the table given below.

Pictures of houses	What is this type of a house called?	What are these houses made of?
	Te__t	
	Bui__din__	
	Sto__eh__use	
	Ho__sebo__t	



परमाणु ऊर्जा शिक्षण संस्था

Atomic Energy Education Society

वार्षिक परीक्षा /Annual Examination Practice paper-2

कक्षा/Class: III

अवधि/Duration: 3 Hours

विषय/Subject: TWAU

अधिकतम अंक/ Maximum Marks: 80

विद्यार्थी द्वारा भरा जाए/ to be filled by the student

अद्वितीय परीक्षा संख्या/ Unique Examination number : _____

कक्षा/अनुभाग Class/Sec.: _____ दिनांक/Date: _____

परीक्षा का दिन / Day Of Examination: _____

विद्यालय का नाम / Name of the school: _____

निरीक्षक का हस्ताक्षर (दिनांक सहित)/Invigilator's Sign (with date): _____

अध्यापको द्वारा भरा जाए /To be filled by the Teachers

प्राप्तांक - _____ पूर्णांक- _____

परीक्षक का हस्ताक्षर (दिनांक सहित)/ Examiner's Sign (with date): _____

जाँचकर्ता का हस्ताक्षर (दिनांक सहित)/ Cross Checker's Sign (with date): _____

परीक्षा प्रभारी का हस्ताक्षर (दिनांक सहित)/ Exam I/C Sign (with date): _____

सामान्य निर्देश/General instructions:

- 1) प्रत्येक प्रश्न के सामने अंक दर्शाए गए हैं/Marks are indicated against each question.
- 2) प्रत्येक प्रश्न को ध्यान से पढ़ें और उत्तर स्पष्ट रूप से दें / Read each question carefully and answer carefully.
- 3) सुनिश्चित करें कि प्रत्येक खंड के प्रश्नों के उत्तर दिए गए हैं/ Ensure that questions from each section are answered.

4) छात्र को यह सुनिश्चित करना चाहिए कि उत्तर पुस्तिका क्षतिग्रस्त या मुड़ी हुई न हो/ The student should ensure that the answer sheet is not damaged or folded.

SECTION A: OBSERVATION AND REPORTING (30 MARKS)

I. Choose the correct answer from the given options and fill in the blanks. (5x1M=5 M)

- i. _____ was one of the first villages to become waste-free.
a) Assam b) Mysuru c) Chhota Narena d) Indore
- ii. _____ is a mixture of metals.
a) Clay b) Plastic c) Sand d) Alloy
- iii. _____ is the largest source of water on the Earth.
a) Lake b) Pond c) River d) Ocean
- iv. We get rice from _____.
a) animals b) plants c) insects d) honeybees
- v. _____ is a liquid found deep underground.
a) Petroleum b) Fibre c) Honey d) Rock

II. Match the following.

(5x1M=5M)

- | | |
|-------------------|----------------------------------|
| (a) Transparent | (i) A lamp shade made of paper |
| (b) Translucent | (ii) a steel plate |
| (c) Opaque | (iii) A glass used in spectacles |
| (d) Natural thing | (iv) diesel |
| (e) Petroleum | (v) Trees |

III. Circle the odd one.

(5x1M=5M)

- | | | | |
|----------------|------------|---------|-----------------|
| 1. River | Pond | Chair | Lake |
| 2. Ragi | Rice | Plastic | Wheat |
| 3. Wood | Paper | gum | insect |
| 4. fruit peels | egg shells | metal | vegetable waste |

5. Curd

Milk


watermelon

Honey

IV. Observe the picture and answer the following questions.

(5x2M=10M)

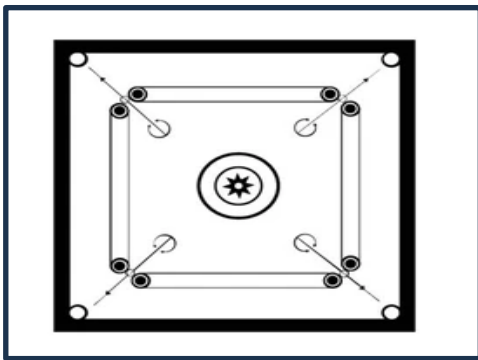
i.



a) Name the animal. _____

b) Write one sentence about it

ii.



a) Name the game. _____

b) What kind of game is it?

(Indoor game/Outdoor game)

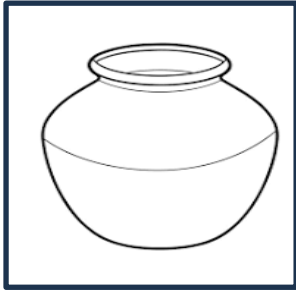
iii.



a) Name the vegetable in the figure.

b) What kind of vegetable is it? (stem or root)

iv.



a) Name the picture.

b) What is the use of it?

iv.



a) Name the picture.

b) What is the use of it?

V. Arrange the following sentences of the making pot in correct order.

(WRITE NUMBERS 1 TO 5)

(5x1M=5M)

- a) Knead clay dough with water. _____
- b) Dig the soil and sieve it. _____
- c) Dry them under the sun. _____
- d) Use wheel to give shape to the pot. _____
- e) Heat in the 'kiln' to make pot strong. _____

SECTION B: IDENTIFICATION AND CLASSIFICATION (25 MARKS)

I. Name any two for each of the following.

(5x1M=5 M)

- i. Leaves that we eat _____, _____
- ii. Water sources _____, _____
- iii. Objects made of metals _____, _____
- iv. Unhealthy food items _____, _____
- v. Petroleum products _____, _____

II. Fill in the blanks with the words given in the help box.

(5x1M=5M)

neem twigs

56

Rain

kiln

artificial

- i. _____ is the main source of water.
- ii. There are _____ varieties of food in Chhappan bhog.
- iii. We use _____ to clean our teeth in our traditional method.
- iv. Things that are made by people are called _____ things.
- v. The potter's oven is called a _____

III. Answer the following questions.

(5x2M=10M)

- i. Two dustbins are drawn below. Write the names of the waste materials which will go into each of them.

Plastic bottles	leaves	glass	fruit peels
-----------------	--------	-------	-------------



- ii. Which of the following places is considered a safe or unsafe area to play? Write **safe** or **unsafe**.

- a) A busy road _____
- b) A park _____
- c) A Roof without railings _____
- d) A construction site _____

- iii. Write the following examples of solids, liquids and gaseous objects in the table given below.

(petrol book water air wood oxygen milk stone)

Solid objects	Liquid objects	gaseous objects

iv. Write two examples each of Natural and Artificial things.


Natural things	Artificial things

v. List out two things in each group.

a) Foods that we get from plants _____

b) Foods that we get from animals _____

IV. Identify the picture of food items and write Healthy or Unhealthy in the table given below. (5x1M=5M)

S.No.	Pictures of food items	Healthy/Unhealthy
1		

II. Answer the following.

(5x2M=10M)

1. Write four uses of water.

2. Write any two ways to keep your surroundings clean?


3. What are the food items that you include in your balanced diet?

4. Name any four objects that you use daily and the materials they are made of.

5. Name four ingredients used to make eco-friendly cleaners.

III. Write any five habits that keep you healthy, fit and clean in your life. (1x5M=5M)

IV. A) Decorate the given objects with different patterns and write their names. 2 M





B) Draw an animal which has patterns on its body and write its name.

1 M

C) Draw any two stems that we eat and write their names.

2 M



परमाणु ऊर्जा शिक्षण संस्था
Atomic Energy Education Society

वार्षिक परीक्षा /Annual Examination Practice paper-3

कक्षा/Class: 3

अवधि / Duration : 3 Hours

विषय/Subject : TWAU

अधिकतम अंक/Maximum Marks :80

विद्यार्थी द्वारा भरा जाए / To be filled by the Student

अद्वितीय परीक्षा क्रमांक / Unique Examination No: _____

कक्षा / अनुभाग Class / Sec.: _____ दिनांक / Date: _____

परीक्षा का दिन / Day of Examination: _____

विद्यालय का नाम / Name of the School: _____

हस्ताक्षर निरीक्षक (दिनांक सहित) / Invigilator's Sign (With date): _____

अध्यापकों द्वारा भरा जाए / To be filled by the Teachers

प्राप्तांक / Marks Obtained

पूर्णांक / Total Marks

हस्ताक्षर परीक्षक (दिनांक सहित) / Examiner's Sign (With date): _____

हस्ताक्षर जाँचकर्ता (दिनांक सहित) / Cross Checker's Sign (With date): _____

हस्ताक्षर परीक्षा प्रभारी (दिनांक सहित) / Exam I/C Sign (With date): _____

सामान्यनिर्देश / General Instructions:

1. Marks are indicated against each question.
2. Read each question carefully and answer it in neat handwriting.
3. Ensure that questions from each section are answered. All questions are compulsory.
4. The student should ensure that the answer sheet is not damaged or folded.


OBSERVATION AND REPORTING (30 MARKS)

I. Choose the correct answer and fill in the blanks: (5x1=5M)

1. We should keep our surroundings neat and _____.
a) untidy b) clean c) messy
2. Glass is mostly made of _____.
a) rubber b) wood c) sand
- 3) Proper sleep makes us feel active and _____.
a) fresh b) tired c) bored
- 4) _____ is not a healthy food item.
a) Chapathi & curry b) burger c) idli & chutney
- 5) We celebrate National Cleanliness Day on _____ every year.
a) 30th January b) 26th February c) 25th April

II Observe the pictures and answer the following questions: (5x2=10M)

(1)



Name of the game: _____

It is an _____ (outdoor/indoor) game.

(2)



Name of the picture: _____

It is found in _____ (state)

(3)



This is the picture of a _____

This is used by potter to make _____

(4)



This is a _____

We use for birds to drink water during
_____ season

(5)



This is a _____

It is _____ (safe / unsafe) to play for children.

III. Give one word:

(5x1=5M)

1. A special food prepared on festivals and auspicious occasions with 56 varieties of food items.

2. Things which are found in nature.

3. A liquid found deep under the ground.

4. Things that we can see through them other objects.

5. The food that contains all the nutrients in the right amount.

IV. Arrange the following sentences of process of making a pot in correct order and rewrite them (One is done for you. Use numbers from 1 to 5)

(1X5=5M)

- Put the clay on a potter's wheel. ()
- Take the clay and make it wet. ()
- Shape it by spinning it. ()
- Dry and put them into a kiln. ()
- Knead the clay like dough. ()

- Then the pots are ready for use. (6)

V. Give two examples of each:

(1X5=5M)

1. Opaque objects: _____ , _____
2. Metals that we use at home: _____ , _____
3. Vegetables that are eaten raw: _____ , _____
4. Eco-friendly things that we use at home: _____ , _____
5. Uses of water: _____ , _____

IDENTIFICATION AND CLASSIFICATION (25 MARKS)

I. Fill in the blanks with the words given in the help box. (1X5=5M)

Indore	raw mangoes	gaseous	plastic	ore
---------------	--------------------	----------------	----------------	------------

1. Aam panna is made from _____.
2. Water vapour is the _____ form of water.
3. Metals are extracted from _____.
4. The cleanest city in India is _____.
5. Electrical switches are made of _____.

II. Match the following

(1X5=5M)

A

1. Wood
2. Carrom board
3. Glass
4. Mountains
5. Hockey

B

- a) Transparent object
- b) Outdoor game
- c) Natural objects
- d) Indoor game
- e) Opaque object

III. Answer the following questions:

(2x5=10 M)

1. Why should we eat seasonal food items?

2. Where do these materials come from?

i) Cotton saree : _____

ii) Wooden table : _____

iii) Glass bowl: _____


iv) Iron kadai : _____

3. Classify the following things in the given table :


Petrol	duster	smoke	ice	coconut oil
---------------	---------------	--------------	------------	--------------------

Solid	Liquid	Gas

4. Observe the two walls and answer the following.



A



B

i) Tick the stronger wall.

ii) Which one falls more easily when pushed? Tick it.

5. How can we manage waste? write any two ways.

IV. Write TRUE or FALSE:

(1X5=5M)

1. Moyna's Dadu uses a tamarind twig to clean his teeth. ()
2. The Champion advised Shirin to eat a balanced diet to stay healthy and strong. ()
3. Our aim to keep the surroundings clean is "Want not, Waste not" ()
4. We reuse the water used for cleaning vegetables for watering the plants. ()
5. Silluk village in Arunachal Pradesh is called a Zero waste village. ()

DISCOVERY OF FACTS (25 MARKS)

I. Circle the odd one:

(1X5=5M)

- | | | | |
|-------------------|--------------|-----------------|--------------------|
| 1. Glass | Table | Spectacles | Window pane |
| 2. Singing a song | making tea | watering plants | kneading the dough |
| 3. Aeroplane | motor cycle | mountain | helicopter |
| 4. Diesel | kerosene oil | water | petrol |
| 5. Milk | cheese | paneer | honey |

II. Answer the following:

1. How can we reduce food waste at home?

2. Name any two indoor and two outdoor games.


3. What safety rules do you follow at school? write any two of them.

4. Where do you find patterns in nature?

5. What are translucent objects? Give two examples

III. Two dustbins are given here. Colour the first one green and the second bin blue. Write the names of the waste material from the help box which will go into each of them


Plastic bottles	banana peels	dried leaves	milk sachets	light bulbs
onion peels	rotten fruits	old pant pieces		




IV. Draw and colour:

(1X5=5M)


1. A root that we eat




2. A pattern on a leaf




3. Your favourite fruit



4. Natural object



5. Any vessel used in your kitchen





परमाणु ऊर्जा शिक्षण संस्था
Atomic Energy Education Society

वार्षिक परीक्षा / Annual Examination Practice paper-4

कक्षा / Class : III

अवधि / Duration : 3Hours

विषय / Subject : TWAU

अधिकतम अंक / Maximum Marks : 80

विद्यार्थी द्वारा भरा जाए / To be filled by the Student

अद्वितीय परीक्षा क्रमांक / Unique Examination No: _____

कक्षा / अनुभाग Class /Sec.: _____ दिनांक / Date: _____

परीक्षा का दिन / Day of Examination: _____

विद्यालय का नाम / Name of the School: _____

हस्ताक्षर निरीक्षक (दिनांक सहित) / Invigilator's Sign. (With date): _____

अध्यापकों द्वारा भरा जाए / To be filled by the Teachers

प्राप्तांक / Marks Obtained

पूर्णांक / Total Marks

हस्ताक्षर परीक्षक (दिनांक सहित) / Examiner's Sign. (With date): _____

हस्ताक्षर जाँचकर्ता (दिनांक सहित) / Cross Checker's Sign. (With date): _____

हस्ताक्षर परीक्षा प्रभारी (दिनांक सहित) / Exam I/C Sign. (With date): _____

सामान्य निर्देश / General Instructions:

This paper consists of three sections.

All the questions are compulsory.

Section - A

Observation and Reporting (30 Marks)

QA-I. Fill in the blanks with the correct option given.

(5 Marks)

- i. The main source of water is _____. (sea/river/rain)
- ii. Light can't pass through _____ objects.
(transparent/ opaque / translucent)
- iii. Potters use _____ to make pots. (glass/ clay/ rubber)
- iv. _____ are used to construct houses and buildings. (plastic/ bricks/ mud)
- v. We brush our teeth _____ daily. (twice/ once/ thrice)


QA-II. Observe the pictures and tick the correct answer.

(3 Marks)


1. The natural source of water.



2. The food items from which we get the vitamins and minerals.



3. Which one is an indoor game?



QA-III. Write True or False.


(4 Marks)

1. Fried foods are good for our health. _____
2. Man-made things are artificial things. _____
3. People in the construction areas and factories should wear helmets. _____
4. We should brush our teeth once daily. _____

QA-IV. See the pictures and write what materials are used to make these. (4Marks)



1. _____



2. _____



3. _____

4. _____

QA-V. Circle the odd one out.

(5 Marks)

1. babool peepal neem karanj
2. plastic river flower mountains
3. wood windowpane book steel plate
4. pulses paneer curd egg
5. water ice steam fruits

QA-VI. Write five good habits that you do to have a healthy body and happy mind.

(5 Marks)

QA-VII. Match the following.

(4 Marks)

COLUMN A	COLUMN B
1.potato	a.Brass and bronze
2.zero wastage village	b.water to drink
3.alloy	c.Stem that we eat
4.6-8 glasses daily	d.Silluk in Arunachal Pradesh

Ans. _____

Section -B

Identification and Classification (25 Marks)

QB-I. Fill in the blanks using the words given. (5 Marks)

salty	compost	helmets	unhealthy	kiln
-------	---------	---------	-----------	------

1. _____ is food for plants and for the tiny animals that live in the soil.
2. We should avoid _____ foods.
3. People wear _____ for their safety.
4. Bricks become hard after being baked in a _____.
5. Saline water means _____ water.

QB-II. Name two objects of the following types. (5 Marks)

1. flexible - _____
2. green leafy vegetables - _____
3. liquids - _____
4. natural things - _____
5. things that a potter makes - _____

QB-III. Give reasons for the following statements. (3x2Marks= 6 marks)

1. We can't use rubber or cloth to make a table.

2. We should eat home-cooked- balanced meals daily.

-
3. We don't go with strangers or anybody other than our family members or someone our family trusts.
-
-

QB-IV. Put the words given in their right group.

(5 Marks)

(chips river gold mango squirrel burger watermelon aluminium
lake zebra)

Summer fruits		
Water bodies that join the sea and ocean		
Unhealthy food		
Patterns on their body		
Common metals		

QB-V. Arrange the images correctly by numbering them from 1 to 5. (4 Marks)



Section- c

Discovery of Facts (25 Marks)

QC-I. Answer the questions.

(5x2Marks=10 Marks)

1. How do birds clean their feathers?

2. Write two things that you do to keep your school clean.

3. What is a balanced diet?

4. What should you do for animals and birds during summer?

5. How do you get water at home?

QC-II. Name the following safety tools. (5 Marks)











QC-III. Write the following wastes in their proper bins. (3+1+1=5 Marks)

(vegetables, polythene, paper envelope, rotten fruits, plastic toy, leaves)



Green bin



Blue bin

Q. What is recycling? Which bin has things for recycling?

QC-IV. Draw and colour and name 2 roots and two fruits that we eat. (5 Marks)