

- b) 4 months have $10 + 0$
- c) $7 + 5 + 4$ one handspan long
- d) Kashmir 16
- e) My face teeth chatter



3. Write true or false for the following statements .






- a) Long months have 31 days . []
- b) Wednesday comes before Tuesday . []
- c) We celebrate Teacher's day in the month of October . []
- d) Rakesh went to a canteen and ate a dosa for Rs28 and a vada for Rs10 . The amount he spent was Rs 48. []
- e) Radha wants 22 beads. So Harish gave her 10 beads of 2 necklaces and 2 loose beads . []

4 . Fill in the blanks.

- a) _____ tens + 7 ones = 97



b) Each  is equal to 10 points and  is equal to 1 point .

     = _____ points .

c) The money shown below is Rs _____ .



d) $5 + 4 + \underline{\quad\quad} = 14$

e) October month has _____ days .

f) Write a letter which has 2 slanting lines and a sleeping line . _____

g) The twelfth month of the year is _____ .

h) Write the number in words .

49 = _____ .

i) _____ + _____ = 17

j) If today is Thursday. Which day was it the day before yesterday?

_____ .

II . Do as directed .

a) I need to pay the shopkeeper Rs 25 for buying a note book . I pay _____

ten rupee notes and _____ one rupee coins .

b) $54 = \underline{\hspace{2cm}} + \underline{\hspace{2cm}}$

c) $\underline{\hspace{2cm}} = 90 + 6$

d) Tuesday comes before _____ .

e) The eleventh month of the year is _____ .

f) There are _____ days in a week .

g) Two months after October is _____ .

h) Name the place in India, there is too cold . That makes our teeth chatter .

_____ .

i) Count the numbers of lines in the given word. **W A L L**

1. slanting lines _____ 2 . sleeping lines _____

j) Following are the names of four children .

HARI DINESH RAJAN RANI

1 . The number of names starting with letter R are _____ .

2 . The name with the most number of letter is _____ .

k) How many 10 - rupee notes make a 60 - rupee? _____ .

l) Find the answers .

1 . $5 + 3 + 7 =$ _____ .

2 . _____ $+ 6 + 4 = 15$

3 . 1 ten $+ 1$ one $=$ _____

4 . $80 -$ _____ $= 75$

m) $\begin{array}{r} 17 \\ + 14 \\ \hline \\ \hline \end{array}$

n) $\begin{array}{r} 80 \\ + 15 \\ \hline \\ \hline \end{array}$

o) $\begin{array}{r} 39 \\ - 19 \\ \hline \\ \hline \end{array}$

III . Solve the problems.

a) We have to clean our school today. We make teams. Each team has 10

students . The number of students in the classes are :

Classes	No of students
Class 1	54
Class 2	46
Class 3	32
Class 4	43
Class 5	25

1. Now fill the below table.

Classes	No of teams	Students left
Class 1	5 teams
Class 2	6 students
Class 3	3 teams
Class 4	3 students
Class 5


2 . How many more teams can be made with all these students left ?

_____ .

b) Vaisha and Sneha play a board game by tossing a coin . The board

has numbers from 1 to 19 . If they get a head , they move the button by 10

steps and if they get a tail they move the button by 1 step .

Start 	1	2	3	4 Vaisha	5	6	7	8	9
--	---	---	---	-------------	---	---	---	---	---

19	18	17 Sneha	16	15	14	13	12	11	10
----	----	-------------	----	----	----	----	----	----	----

1 . Vaisha is at 4 gets a head . She will move her button from 4 to _____ .

2 . Sneha is at 17 and gets a tail . She will move her button to _____ .

c) Chikku rabbit can eat 33 carrots in a week and Meeku rabbit can eat 50

carrots in a week . Who eats more carrots and by how much?

d) Sairam bought a bat and a ball for 32 rupees and 28 rupees . How much

money did he pay to the shopkeeper ?

e) Tarani plucked 45 flowers and Bhargavi plucked 37 flowers . How many

more flowers did Tarani pluck than Bhargavi ?


f) Fill in the blanks .



3 handspan



8 handspan



1 . How far is the snake from the rat? _____ .

2 . How far is the eagle from the snake? _____ .

3 . How far is the eagle from the rat? _____ .

4 . Who will the eagle reach the first: snake or rat? _____ .

g) Diary : Month - March

March 7th - collected 35 rupees

March 10th - bought a box for 20 rupees

March 20th - collected 56 rupees

March 23rd - bought a pen for 30 rupees

Total money collected = _____ .

Total money spent = _____ .

h) Sivakami had 22 strawberries . She ate 10 strawberries . How many

strawberries are left with her?

i) Read the table and fill in the blanks .

Drinks	No of children
Tea	8
Coffee	5

Milk	15
Fruit juice	12

1. The number of children who drink tea and fruit juice are? _____ .

2. The number of children who drink tea are _____ (more / less)

than the children who drink coffee .

j) Devi is going to her grandmother, who lives in the next village. She wants

to take 12 kg sugarcane, 5 kg apples and 8 kg tomatoes. She has to cross

the river. In the boat she can take 20 kg weight only.

1. Name the things that Devi can carry in the boat .

_____ .

2. Name the thing that Devi can leave at her village.

_____ .

