

**ATOMIC ENERGY EDUCATION SOCIETY**

**(2015-16)**

**Sub: Mathematics**

**Sample Paper**

**Class: 1**

**Q1. CHOOSE THE CORRECT ANSWER AND FILL IN THE GAPS.**

a) \_\_\_\_\_ is the tallest animal.

(Mouse      Giraffe      Monkey)

b) \_\_\_\_\_ bundles make 30.

(3              10              30)

c) There are \_\_\_\_\_ letters in the name "DEEPU".

(8              4              5)

d) The number 76 is written in words as \_\_\_\_\_.

( sixty-seven              seventy-six              seven-six)

e) Four \_\_\_\_\_ coins make 2 rupees.



**Q2. STATE TRUE OR FALSE.**

a) A circle has no sides. (              )

b) My pencil is 5 hand spans long. (              )

c) One more than 90 is 95. (              )

d) A square and a rectangle have same number of sides. (              )





e) 5 bundles of 10 sticks each will make 100. ( )

**Q3. MATCH THE FOLLOWING.**

- |                           |    |
|---------------------------|----|
| a) 9 tens + 7 ones        | 88 |
| b) Nineteen               | 31 |
| c) 8 bundles and 8 sticks | 97 |
| d) 5 less than 50         | 19 |
| e) Number after 30        | 45 |

**Q4 COMPLETE THE PATTERN.**



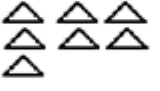
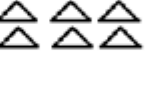
a) 

					
--	--	--	--	--	--

b) 

<b>A9</b>	<b>B8</b>	<b>C7</b>	<b>D6</b>		
-----------	-----------	-----------	-----------	--	--

c) 

					
---	---	---	---	--	--

d) 

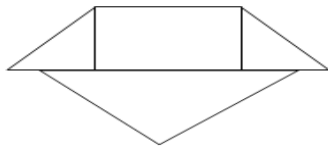
<b>25</b>	<b>35</b>	<b>45</b>	<b>55</b>		
-----------	-----------	-----------	-----------	--	--

e) 

<b>4</b>	<b>8</b>	<b>12</b>	<b>16</b>		
----------	----------	-----------	-----------	--	--

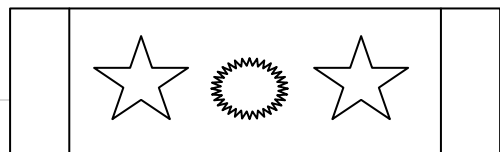
**Q5. FILL IN THE GAPS.**

a) There are \_\_\_\_\_  's in the given figure.



b) This picture is seven \_\_\_\_\_

\_\_\_\_\_



long.



c) The number that comes between 10 and 12 is \_\_\_\_\_.

d) The letter 'O' comes \_\_\_\_\_ times in the word "SCHOOL".


e) This is a \_\_\_\_\_ rupees note.



**Q.6.FILL IN THE BOXES**

66						
						79

**Q.7. .COLOUR THE ○ - YELLOW □ - BLUE △ - GREEN □ - RED**



**Q8) DO AS DIRECTED.**

a) How many circles are there in the figure?









Answer \_\_\_\_\_

b) The letter 'P' come \_\_\_\_\_ times in the word **PINEAPPLE**.

c) Extend the sequence.

YES	NO	YES	NO		
-----	----	-----	----	--	--

d) Tick ( ✓ ) the one that costs more.


   <input type="checkbox"/>	   <input type="checkbox"/>
---	--

(e) Count and write the number of beads.



Answer \_\_\_\_\_

f) Draw a pencil longer than the given one.



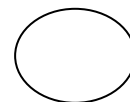
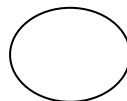
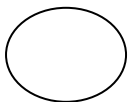
g) (i) Circle the smallest number .

4 tens and 2 ones


4 tens and 7 ones

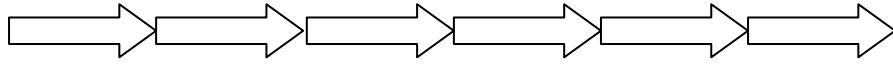
4 tens and 0 ones

ii) Tick ( ✓ ) the heaviest fruit.



h) This board is \_\_\_\_\_ arrows long.





i) Color the thicker DRUM.





j) (i) What comes after 81?

81		
----	--	--

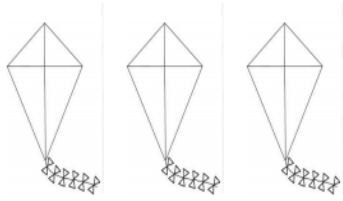
ii) What comes before 100?

		100
--	--	-----

**Q9 .DO AS DIRECTED .**

a) The cost of a  is 

Draw the number of notes you may need to buy three kites.



\_\_\_\_\_

b) Write the missing numbers.


82    83    \_\_\_\_\_    85    \_\_\_\_\_    87    88

34    33    32    31    30    \_\_\_\_\_    \_\_\_\_\_


58    \_\_\_\_\_    60    61    62    \_\_\_\_\_    64

11    \_\_\_\_\_    13    14    \_\_\_\_\_    16    17


c) Draw the bundles and sticks for the number 27



Tens	Ones



d) Name the shapes of the following things.





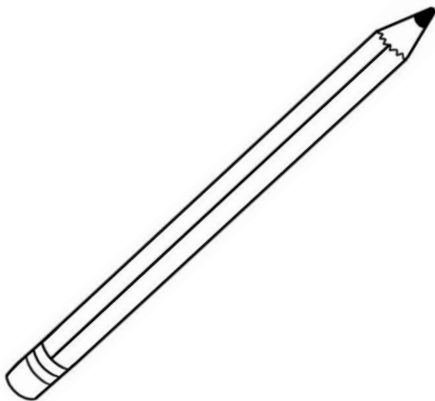
e) Choose the correct price for the given things and write in the tag.

₹ 1

₹ 50

₹ 7

₹ 15







f) Write in words.

35 - \_\_\_\_\_ 11- \_\_\_\_\_

Write in numbers.

Forty-two- \_\_\_\_\_ Eighty-nine- \_\_\_\_\_

g) Make the given amount using different combinations of coins.



5 Rupees- \_\_\_\_\_

5 Rupees- \_\_\_\_\_

(h) Count and write the number of letters for the days given below.


SUNDAY -

MONDAY -


WEDNESDAY -

FRIDAY -

How many days have six letters?

How many times  comes in all the days taken together?

i) Look at the picture and answer the following questions

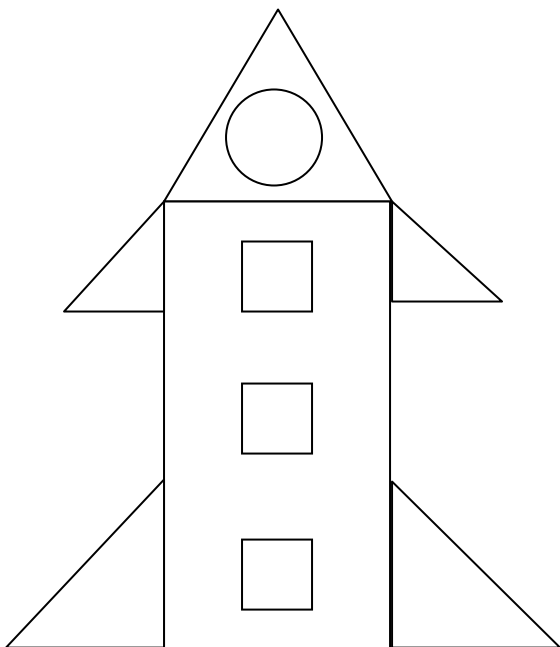


The girl is \_\_\_\_\_ feet away from the house.


The girl is \_\_\_\_\_ feet away from the car.

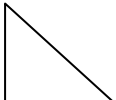
The car is \_\_\_\_\_ feet away from the house.

(j) Count the number of shapes and write their number.



 \_\_\_\_\_

 \_\_\_\_\_

 \_\_\_\_\_





Draw the shape that occurs the least. \_\_\_\_\_

Draw the shape that occurs the most. \_\_\_\_\_